

# CHEMISTRY PAPER 1

## (THEORY)

**Maximum Marks: 70**

**Time Allowed: Three hours**

*Candidates are allowed additional 15 minutes for only reading the paper.  
They must NOT start writing during this time.*

*This paper is divided into four sections – A, B, C and D.*

*Answer all questions.*

*Section A consists of one question having sub-parts of one mark each.*

*Section B consists of ten questions of two marks each.*

*Section C consists of seven questions of three marks each, and*

*Section D consists of three questions of five marks each.*

*Internal choices have been provided in one question each in Section B,*

*Section C and Section D.*

*All working, including rough work, should be done on the same sheet as, and adjacent to the rest of the answer.*

*The intended marks for questions or parts of questions are given in brackets [ ].*

*Balanced equations must be given wherever possible and diagrams where they are helpful.*

*When solving numerical problems, all essential working must be shown.*

*In working out problems, use the following data:*

$$\text{Gas constant } R = 1.987 \text{ cal deg}^{-1} \text{ mol}^{-1} = 8.314 \text{ JK}^{-1} \text{ mol}^{-1}$$

$$= 0.0821 \text{ dm}^3 \text{ atm K}^{-1} \text{ mol}^{-1}$$

$$1 \text{ l atm} = 1 \text{ dm}^3 \text{ atm} = 101.3 \text{ J. } 1 \text{ Faraday} = 96500 \text{ coulombs.}$$

$$\text{Avogadro's number} = 6.023 \times 10^{23}.$$

### SECTION A – 14 MARKS

#### Question 1

(A) Fill in the blanks by choosing the appropriate word(s) from those given in the brackets: [4×1]

[stable, low, aldehyde, unstable, 6, 4, ethane, Clemmensen's, 2, 3, carboxylic acid, high, propane, Rosenmund's]

- (i) The primary alcohols are easily oxidised first into \_\_\_\_\_ and then into \_\_\_\_\_.
- (ii) The intermediate activated complex in a chemical reaction is highly \_\_\_\_\_ due to \_\_\_\_\_ energy.
- (iii) The coordination number and oxidation state of the complex  $\text{K}_4[\text{Fe}(\text{CN})_6]$  are \_\_\_\_\_ and \_\_\_\_\_ respectively.
- (iv) Propanone on reaction with zinc-amalgam in presence of conc. HCl gives \_\_\_\_\_ and the reaction is known as \_\_\_\_\_ reduction.

**This Paper consists of 8 printed pages.**

1223-862A

© Copyright reserved.

Turn over

(B) Select and write the correct alternative from the choices given below:

[4×1]

- (i) The reaction of a primary amine with chloroform and ethanolic KOH is called:
- (a) Carbylamine reaction
  - (b) Kolbe's reaction
  - (c) Reimer-Tiemann reaction
  - (d) Wurtz-Fittig reaction
- (ii) Which one of the following statements is **TRUE** for the Galvanic cell?
- (a) Electrons flow from copper electrode to zinc electrode.
  - (b) Current flows from zinc electrode to copper electrode.
  - (c) Cations move towards copper electrode.
  - (d) Cations move towards zinc electrode.
- (iii) Which one of the following compounds is diamagnetic and colourless?
- (a)  $K_2Cr_2O_7$
  - (b)  $ZnSO_4$
  - (c)  $KMnO_4$
  - (d)  $Cr_2(SO_4)_3$
- (iv) For a first order reaction, the half-life period ( $t_{1/2}$ ) is:
- (a) proportional to the initial concentration.
  - (b) inversely proportional to the initial concentration.
  - (c) proportional to the square root of the initial concentration.
  - (d) independent of the initial concentration.

(C) Match the following:

[4×1]

- |                      |                        |
|----------------------|------------------------|
| (i) Phenol           | (a) Hexane + heptane   |
| (ii) EDTA            | (b) Globular protein   |
| (iii) Ideal solution | (c) Azo dye            |
| (iv) Insulin         | (d) Hexadentate ligand |

(D)

[2×1]

- (i) **Assertion** : If a solution contains both  $H^+$  and  $Na^+$  ions, the  $H^+$  ions are reduced first at cathode.

**Reason** : Cations with higher  $E^0$  value are reduced first at cathode.

- (a) Both Assertion and Reason are true, and Reason is the correct explanation for Assertion.
- (b) Both Assertion and Reason are true, but Reason is not the correct explanation for Assertion.
- (c) Assertion is true but Reason is false.
- (d) Assertion is false but Reason is true.
- (ii) **Assertion** : Addition of bromine water to 1-butene gives two optical isomers.

**Reason** : The product formed contains two asymmetric carbon atoms.

- (a) Both Assertion and Reason are true, and Reason is the correct explanation for Assertion.
- (b) Both Assertion and Reason are true, but Reason is not the correct explanation for Assertion.
- (c) Assertion is true but Reason is false.
- (d) Assertion is false but Reason is true.

## SECTION B – 20 MARKS

### Question 2

[2]

Calculate the mass of ascorbic acid (molecular mass = 176 g/mol) that should be dissolved in 155g of acetic acid to cause a depression of freezing point by 1.15K. Assume that ascorbic acid does not dissociate or associate in the solution.

( $K_f$  for acetic acid = 3.9 K kg/mol)

### Question 3

[2]

Give a reason for the following:

- (i)  $Cu^{+2}$  salts are paramagnetic while  $Cu^+$  salts are diamagnetic.
- (ii)  $Mn^{+2}$  compounds are more stable than  $Fe^{+2}$  compounds.

**Question 4**

[2]

Give chemical equations for each of the following:

- (i) Ethyl chloride is treated with aqueous KOH solution.
- (ii) Chlorobenzene is treated with ammonia at 573K and high pressure.

**Question 5**

[2]

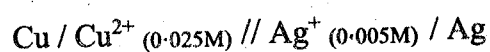
State one reason for each of the following:

- (i) Alkylamine is soluble in water whereas arylamine is insoluble in water.
- (ii) Methylamine is a stronger base than methyl alcohol.

**Question 6**

[2]

Calculate the emf of the following cell at 298K.





$$\text{Given } E^\circ_{\text{Cu}^{2+}/\text{Cu}} = 0.34\text{V}, E^\circ_{\text{Ag}^+/\text{Ag}} = 0.80\text{V},$$

$$1 \text{ Faraday} = 96500 \text{ C mol}^{-1}$$

**Question 7**

[2]

Complete and balance the following chemical equations:

**Question 8**

[2]

(i) How will the following be obtained? (Give chemical equation)

- (a) Ethanol from Grignard's reagent.
- (b) Diethyl ether from sodium ethoxide.

**OR**

- (ii) An organic compound [A]  $\text{C}_2\text{H}_6\text{O}$ , on heating with conc.  $\text{H}_2\text{SO}_4$  at 413K gives a neutral compound [B]  $\text{C}_4\text{H}_{10}\text{O}$ . Compound [B] on treatment with  $\text{PCl}_5$  gives a product, which on subsequent treatment with KCN yields compound [C]  $\text{C}_3\text{H}_5\text{N}$ . Compound [C] on hydrolysis gives an acid [D]  $\text{C}_3\text{H}_6\text{O}_2$ . Identify the compounds [A], [B], [C] and [D].

**Question 9****[2]**

The osmotic pressure of blood at 37°C is 8.21 atm. How much glucose in grams should be used per litre of aqueous solution for an intravenous injection so that it is isotonic with blood? (Molecular wt of glucose = 180g/mol)

**Question 10****[2]**

An aromatic carboxylic acid [A] which readily sublimes on heating, produces compound [B] on treatment with  $\text{PCl}_5$ . Compound [B], when reduced in the presence of Pd catalyst over  $\text{BaSO}_4$  poisoned by sulphur in xylene solution gives compound [C]. When compound [C] is condensed in the presence of alcoholic KCN, it gives compound [D].

(Molecular formula of compound [D] is  $\text{C}_{14}\text{H}_{12}\text{O}_2$ )

Identify the compounds [A], [B], [C] and [D].

**Question 11****[2]**

State a reason for each of the following:

- (i)  $\text{La}(\text{OH})_3$  is more basic than  $\text{Lu}(\text{OH})_3$ .
- (ii) Transition elements and their compounds act as catalyst.

**SECTION C – 21 MARKS****Question 12****[3]**

20% of a first order reaction is completed in five minutes. How much time will the 60% reaction take to complete? Calculate the half-life period ( $t_{1/2}$ ) for the above reaction.

**Question 13****[3]**

Write the balanced chemical equations for the following name reactions:

- (i) Sandmeyer's reaction
- (ii) Wurtz reaction
- (iii) Finkelstein reaction

**Question 14****[3]**

- (i) Give an example each of reducing sugar and non-reducing sugar.
- (ii) What is *denaturation of proteins*?
- (iii) Give an example each of water soluble vitamin and fat soluble vitamin.

**Question 15****[3]**

When 2g of benzoic acid is dissolved in 25g of benzene, it shows a depression in freezing point equal to 1.62K. Molal depression constant ( $K_f$ ) of benzene is 4.9 K kg mol<sup>-1</sup> and molecular weight of benzoic acid = 122g/mol. What will be the percentage association of the benzoic acid?

(Benzoic acid forms dimer when dissolved in benzene.)

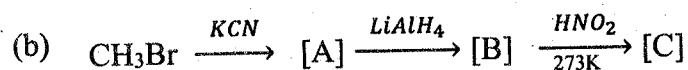
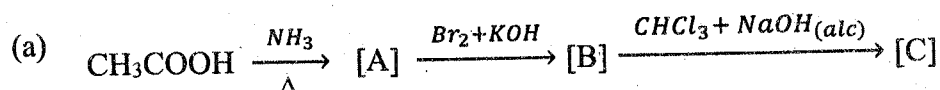
**Question 16****[3]**

Account for the following:

- (i) Phenol is a stronger acid than aliphatic alcohols.
- (ii) Ethanol gives iodoform reaction whereas methanol does not give iodoform reaction.
- (iii) Ethers should not be distilled to dryness.

**Question 17****[3]**

- (i) Identify the compounds [A], [B] and [C] in the following reactions:



OR

- (ii) How will the following be converted? (Give chemical equation)

- (a) Ethyl bromide to ethyl isocyanide.
- (b) Aniline to benzene diazonium chloride.
- (c) Benzene diazonium chloride to phenol.

**Question 18****[3]**

A first order reaction is 50% completed in 40 minutes at 300K and in 20 minutes at 320K. Calculate the activation energy of the reaction.

**SECTION D – 15 MARKS****Question 19****[5]**

- (i) Write the chemical equations to illustrate the following name reactions:
- (a) Cannizzaro's reaction
  - (b) HVZ reaction
  - (c) Aldol condensation
- (ii) How will the following be converted? (Give chemical equation)
- (a) Acetaldehyde to acetone
  - (b) Formaldehyde to urotropine

**Question 20****[5]**

- (i) Name the type of isomerism exhibited by the following pairs of compounds.
- (a)  $[\text{Co}(\text{NH}_3)_5(\text{ONO})]\text{Cl}_2$  and  $[\text{Co}(\text{NH}_3)_5(\text{NO}_2)]\text{Cl}_2$
  - (b)  $[\text{Cr}(\text{H}_2\text{O})_5\text{Cl}]\text{Cl}_2 \cdot \text{H}_2\text{O}$  and  $[\text{Cr}(\text{H}_2\text{O})_4\text{Cl}_2]\text{Cl} \cdot 2\text{H}_2\text{O}$
  - (c)  $[\text{Pt}(\text{NH}_3)_4\text{Cl}_2]\text{Br}_2$  and  $[\text{Pt}(\text{NH}_3)_4\text{Br}_2]\text{Cl}_2$
- (ii) Write the IUPAC names of the following complexes:
- (a)  $[\text{Co}(\text{NH}_3)_4(\text{H}_2\text{O})_2]\text{Cl}_3$
  - (b)  $\text{K}_2[\text{Ni}(\text{CN})_4]$

**Question 21****[5]**

- (i) The specific conductance of  $2.5 \times 10^{-4}$  M formic acid is  $5.25 \times 10^{-5} \text{ ohm}^{-1} \text{ cm}^{-1}$ . Calculate its molar conductivity and degree of dissociation.


Given  $\lambda^\circ_{(\text{H}^+)} = 349.5 \text{ ohm}^{-1} \text{ cm}^2 \text{ mol}^{-1}$  and

$$\lambda^\circ_{(\text{HCOO}^-)} = 50.5 \text{ ohm}^{-1} \text{ cm}^2 \text{ mol}^{-1}$$

- (ii) Calculate the time taken to deposit 1.27g of copper at cathode when a current of 2 amp. is passed through the solution of  $\text{CuSO}_4$ .  
(Atomic weight of Cu =  $63.5 \text{ gmol}^{-1}$ )

OR

- (i) The resistance of a conductivity cell with 0.1M KCl solution is 200 ohm. When the same cell is filled with 0.02M NaCl solution, the resistance is 1100 ohm. If the conductivity of 0.1M KCl solution is  $0.0129 \text{ ohm}^{-1}\text{cm}^{-1}$ , calculate the cell constant and molar conductivity of 0.02M NaCl solution.
- (ii) The emf ( $E^\circ_{\text{cell}}$ ) of the following reaction is 0.89V:



Calculate the value of  $\Delta G^\circ$  for the reaction. Predict whether the above reaction will be spontaneous or not.