

Telangana State Council Higher Education

Notations :

- 1.Options shown in green color and with ✓ icon are correct.
- 2.Options shown in red color and with ✗ icon are incorrect.

Question Paper Name :	Edcet URDU 2022 26th July 2022 Shift 3
Subject Name :	Edcet URDU 2022
Creation Date :	2022-07-26 19:12:14
Duration :	120
Total Marks :	150
Display Marks:	No
Calculator :	None
Magnifying Glass Required? :	No
Ruler Required? :	No
Eraser Required? :	No
Scratch Pad Required? :	No
Rough Sketch/Notepad Required? :	No
Protractor Required? :	No
Show Watermark on Console? :	Yes
Highlighter :	No
Auto Save on Console?	Yes
Change Font Color :	No
Change Background Color :	No
Change Theme :	No
Help Button :	No
Show Reports :	No
Show Progress Bar :	No

TS Edcet

Group Number :	1
Group Id :	8728347
Group Maximum Duration :	0
Group Minimum Duration :	120
Show Attended Group? :	No
Edit Attended Group? :	No
Break time :	0
Group Marks :	150
Is this Group for Examiner? :	No
Examiner permission :	Cant View
Show Progress Bar? :	No

Subject

Section Id :	87283431
Section Number :	1
Section type :	Online

Mandatory or Optional :	Mandatory
Number of Questions :	60
Number of Questions to be attempted :	60
Section Marks :	60
Enable Mark as Answered Mark for Review and Clear Response :	Yes
Maximum Instruction Time :	0
Sub-Section Number :	1
Sub-Section Id :	87283437
Question Shuffling Allowed :	Yes

Question Number : 1 Question Id : 872834907 Question Type : MCQ Option Shuffling : Yes Display Question Number : Yes Is Question Mandatory : No Calculator : None Response Time : N.A Think Time : N.A Minimum Instruction Time : 0

Correct Marks : 1 Wrong Marks : 0

Among the following, a pair of numbers which are not co-primes is

درج ذیل میں، اعداد کا وہ جوڑ جو کو-پرائمس نہیں ہے

Options :

- ✘ 20, 21
- ✘ 7, 9
- ✔ 35, 80
- ✘ 42, 95

Question Number : 2 Question Id : 872834908 Question Type : MCQ Option Shuffling : Yes Display Question Number : Yes Is Question Mandatory : No Calculator : None Response Time : N.A Think Time : N.A Minimum Instruction Time : 0

Correct Marks : 1 Wrong Marks : 0

The decimal expansion of $\frac{7}{80}$ is

$\frac{7}{80}$ کا اعشاری پھیلاؤ ہے

Options :

- ✘ 0.0375
- ✘ 0.875
- ✘ 0.375
- ✔ 0.0875

Question Number : 3 Question Id : 872834909 Question Type : MCQ Option Shuffling : Yes Display Question Number : Yes Is Question Mandatory : No Calculator : None Response Time : N.A Think Time : N.A Minimum Instruction Time : 0

Correct Marks : 1 Wrong Marks : 0

If $A = \{1, 2, 3, 4, 5\}$ and $B = \{3, 4, 5, 6, 7\}$ then the set $A - (A - B)$ is
اگر $A = \{1, 2, 3, 4, 5\}$ اور $B = \{3, 4, 5, 6, 7\}$ ہوگا $A - (A - B)$ تب

Options :

1. ✘ $\{1, 2, 3, 4, 5, 6, 7\}$
2. ✔ $\{3, 4, 5\}$
3. ✘ $\{1, 2\}$
4. ✘ $\{3, 4, 5, 6, 7\}$

Question Number : 4 Question Id : 872834910 Question Type : MCQ Option Shuffling : Yes Display Question Number :
Yes Is Question Mandatory : No Calculator : None Response Time : N.A Think Time : N.A Minimum Instruction Time :
0

Correct Marks : 1 Wrong Marks : 0

The zeroes of the polynomial $x^3 - x^2$ are
کثیرالثانی $x^3 - x^2$ کے صفر میں

Options :

1. ✔ $0, 0, 1$
2. ✘ $0, 1, 1$
3. ✘ $1, 1, 1$
4. ✘ $0, 0, 0$

Question Number : 5 Question Id : 872834911 Question Type : MCQ Option Shuffling : Yes Display Question Number :
Yes Is Question Mandatory : No Calculator : None Response Time : N.A Think Time : N.A Minimum Instruction Time :
0

Correct Marks : 1 Wrong Marks : 0

The value of $2^{-1} + 2^{-2} + 2^{-3} + 2^{-4}$ is
 $2^{-1} + 2^{-2} + 2^{-3} + 2^{-4}$ کی قدر ہوگی

Options :

1. ✘ 2
2. ✘ $\frac{1}{2}$

3. ✓ $\frac{15}{16}$

4. ✗ $\frac{10}{16}$

Question Number : 6 Question Id : 872834912 Question Type : MCQ Option Shuffling : Yes Display Question Number : Yes Is Question Mandatory : No Calculator : None Response Time : N.A Think Time : N.A Minimum Instruction Time : 0

Correct Marks : 1 Wrong Marks : 0

The solution for the pair of equations $x + 3y = 6$ and $2x - 3y = 12$ is

مساوات کے جوڑے $2x - 3y = 12$ اور $x + 3y = 6$ ہوگا

Options :

1. ✗ (0, 2)

2. ✗ (3, -2)

3. ✗ (0, -4)

4. ✓ (6, 0)

Question Number : 7 Question Id : 872834913 Question Type : MCQ Option Shuffling : Yes Display Question Number : Yes Is Question Mandatory : No Calculator : None Response Time : N.A Think Time : N.A Minimum Instruction Time : 0

Correct Marks : 1 Wrong Marks : 0

If the roots of the quadratic equation $kx(x - 2) + 6 = 0$ are equal, then the value of 'k' is

مربعی مساوات $kx(x - 2) + 6 = 0$ کے جڑیں مساوی ہوں، تب 'k' کی قدر ہوگی

Options :

1. ✓ 6

2. ✗ 2

3. ✗ 4

4. ✗ 3

Question Number : 8 Question Id : 872834914 Question Type : MCQ Option Shuffling : Yes Display Question Number : Yes Is Question Mandatory : No Calculator : None Response Time : N.A Think Time : N.A Minimum Instruction Time : 0

Correct Marks : 1 Wrong Marks : 0

Among the following, an equation that is not quadratic is

درج ذیل میں، وہ مساوات جو مربعی نہیں ہے

Options :

1. ✘ $x(2x + 3) = x^2 + 1$

2. ✘ $(x - 2)^2 + 1 = 2x - 3$

3. ✔ $x^2 + 3x + 1 = (x - 2)^2$

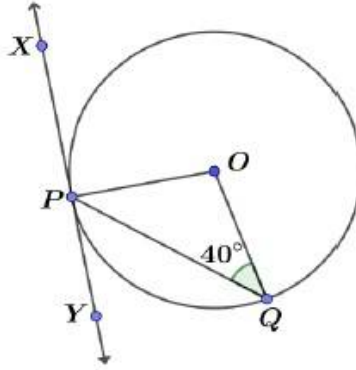
4. ✘ $(x + 1)^2 = 2(x - 3)$

Question Number : 9 Question Id : 872834915 Question Type : MCQ Option Shuffling : Yes Display Question Number : Yes Is Question Mandatory : No Calculator : None Response Time : N.A Think Time : N.A Minimum Instruction Time : 0

Correct Marks : 1 Wrong Marks : 0

For a circle with center 'O', XY is a tangent at point P. If $\angle OQP = 40^\circ$, then the measure of $\angle QPY$ is

دائرہ جس کا مرکز 'O' کے لئے، XY خط مماس نقطہ 'P' پر ہے۔ اگر $\angle OQP = 40^\circ$ ہے، تب $\angle QPY$ کی پیمائش ہوگی



Options :

1. ✘ 40°

2. ✔ 50°

3. ✘ 90°

4. ✘ 60°

Question Number : 10 Question Id : 872834916 Question Type : MCQ Option Shuffling : Yes Display Question Number : Yes Is Question Mandatory : No Calculator : None Response Time : N.A Think Time : N.A Minimum Instruction Time : 0

Correct Marks : 1 Wrong Marks : 0

If $\Delta ABC \sim \Delta PQR$ and $\angle A = 50^\circ$, then the measure of $\angle Q + \angle R$ is

اگر $\Delta ABC \sim \Delta PQR$ اور $\angle A = 50^\circ$ ہو، تب $\angle Q + \angle R$ کی پیمائش ہوگی

Options :

1. ✓ 130°

2. ✗ 90°

3. ✗ 50°

4. ✗ 40°

Question Number : 11 Question Id : 872834917 Question Type : MCQ Option Shuffling : Yes Display Question Number : Yes Is Question Mandatory : No Calculator : None Response Time : N.A Think Time : N.A Minimum Instruction Time : 0

Correct Marks : 1 Wrong Marks : 0

Among the following, the one that is not in Arithmetic Progression is

درج ذیل میں وہ جو سلسلہ حسابیہ میں شامل نہیں ہے

Options :

1. ✗ 3, 6, 9, 12, ...

2. ✗ 9, 14, 19, 24, ...

3. ✓ 13, 15, 18, 22, ...

4. ✗ 21, 17, 13, 9, ...

Question Number : 12 Question Id : 872834918 Question Type : MCQ Option Shuffling : Yes Display Question Number : Yes Is Question Mandatory : No Calculator : None Response Time : N.A Think Time : N.A Minimum Instruction Time : 0

Correct Marks : 1 Wrong Marks : 0

The compound interest on a sum of Rs 2000 for 2 years at the rate of 10% per annum , if the amount is compounded annually is (in Rupees)

رقم 2000 ہر دو سال کا کمپاؤنڈ سود 10% شرح فی سال کے حساب سے کیا ہوگا اگر وہ رقم سالانہ ملائی جاتی ہو

Options :

1. ✗ 840

2. ✓ 420

3. ✖ 2420

4. ✖ 4420

Question Number : 13 Question Id : 872834919 Question Type : MCQ Option Shuffling : Yes Display Question Number : Yes Is Question Mandatory : No Calculator : None Response Time : N.A Think Time : N.A Minimum Instruction Time : 0

Correct Marks : 1 Wrong Marks : 0

Among the following, the measurements not suitable to construct a triangle are

درج ذیل میں وہ پیمائشیں جو ایک مثلث کو تیار کرنے کے لئے موزوں نہیں ہیں

Options :

1. ✖ 8, 4, 13

2. ✔ 8, 4, 4

3. ✖ 7, 6, 10

4. ✖ 8, 4, 3

Question Number : 14 Question Id : 872834920 Question Type : MCQ Option Shuffling : Yes Display Question Number : Yes Is Question Mandatory : No Calculator : None Response Time : N.A Think Time : N.A Minimum Instruction Time : 0

Correct Marks : 1 Wrong Marks : 0

The distance of the point (2, 3) from Y-axis is

Y محور سے نقطہ (2, 3) کا فاصلہ مساوی ہے۔

Options :

1. ✖ $\sqrt{5}$

2. ✖ 5

3. ✔ 2

4. ✖ 3

Question Number : 15 Question Id : 872834921 Question Type : MCQ Option Shuffling : Yes Display Question Number : Yes Is Question Mandatory : No Calculator : None Response Time : N.A Think Time : N.A Minimum Instruction Time : 0

Correct Marks : 1 Wrong Marks : 0

Among the following, which one has value equal to 1?

درج ذیل میں کس کی قدر 1 کے مساوی ہوگی؟

Options :

1. ✓ $\sin 60^\circ \cos 30^\circ + \cos 60^\circ \sin 30^\circ$
2. ✗ $\cos 60^\circ \cos 30^\circ + \sin 60^\circ \sin 30^\circ$
3. ✗ $\frac{\tan 60^\circ + \tan 30^\circ}{1 - \tan 60^\circ \tan 30^\circ}$
4. ✗ $\sin 60^\circ + \cos 30^\circ + \cos 60^\circ + \sin 30^\circ$

Question Number : 16 Question Id : 872834922 Question Type : MCQ Option Shuffling : Yes Display Question Number : Yes Is Question Mandatory : No Calculator : None Response Time : N.A Think Time : N.A Minimum Instruction Time : 0

Correct Marks : 1 Wrong Marks : 0

If an unbiased dice is thrown once, then the probability of getting a prime number on its top face is

اگر ایک ڈائس کو غیر جانبداری سے ایک مرتبہ اچھالا جائے، تو ایک پر اتم عدد کے حاصل ہونے کا امکان ہوگا

Options :

1. ✓ $\frac{1}{2}$
2. ✗ $\frac{1}{3}$
3. ✗ $\frac{1}{6}$
4. ✗ $\frac{2}{3}$

Question Number : 17 Question Id : 872834923 Question Type : MCQ Option Shuffling : Yes Display Question Number : Yes Is Question Mandatory : No Calculator : None Response Time : N.A Think Time : N.A Minimum Instruction Time : 0

Correct Marks : 1 Wrong Marks : 0

If the surface areas of two spheres are in the ratio of 1 : 4, then the ratio of their volumes is

اگر کوئی دو کرّوں کے سطحوں کا رقبہ 1:4 کی نسبت ہو تو ان کے حجم کا تناسب ہوگا

Options :

1. ✗ 1 : 16
2. ✗ 1 : 64
3. ✗ 1 : 12

4. ✓ 1 : 8

Question Number : 18 Question Id : 872834924 Question Type : MCQ Option Shuffling : Yes Display Question Number : Yes Is Question Mandatory : No Calculator : None Response Time : N.A Think Time : N.A Minimum Instruction Time : 0

Correct Marks : 1 Wrong Marks : 0

The median of the observations $-3, -5, -8, 0, 3, 2, -10$ is

اعداد $-3, -5, -8, 0, 3, 2, -10$ کا وسطانیہ ہوگا

Options :

1. ✗ 2

2. ✗ 0

3. ✗ -10

4. ✓ -3

Question Number : 19 Question Id : 872834925 Question Type : MCQ Option Shuffling : Yes Display Question Number : Yes Is Question Mandatory : No Calculator : None Response Time : N.A Think Time : N.A Minimum Instruction Time : 0

Correct Marks : 1 Wrong Marks : 0

If the side of a square is increased by 10%, then the percentage of increase in its area is

اگر کسی مربع کا ضلع 10% تک بڑھا دیا جائے، تو اس کے رقبہ کے بڑھنے کا فیصد ہوگا

Options :

1. ✗ 10%

2. ✓ 21%

3. ✗ 20 %

4. ✗ 11%

Question Number : 20 Question Id : 872834926 Question Type : MCQ Option Shuffling : Yes Display Question Number : Yes Is Question Mandatory : No Calculator : None Response Time : N.A Think Time : N.A Minimum Instruction Time : 0

Correct Marks : 1 Wrong Marks : 0

If the price of a book including 10% GST is Rs 880, then the original price of the book is (in Rupees)

اگر کسی کتاب کی قیمت بشمول دس فیصد GST، 880 روپے ہے، تو پھر اس کتاب کی اصلی قیمت (روپے میں) ہوگی

Options :

1. ✘ 968
2. ✘ 792
3. ✘ 960
4. ✔ 800

Question Number : 21 Question Id : 872834927 Question Type : MCQ Option Shuffling : Yes Display Question Number : Yes Is Question Mandatory : No Calculator : None Response Time : N.A Think Time : N.A Minimum Instruction Time : 0

Correct Marks : 1 Wrong Marks : 0

Which of the following is a translucent material

درج ذیل میں کون سی شے شفاف ہے

Options :

Glass Plate

1. ✘ گاج کی پلیٹ

Oil Paper

2. ✔ آئل پیپر

Plastic Plate

3. ✘ پلاسٹک کی پلیٹ

Mirror

4. ✘ آئینہ

Question Number : 22 Question Id : 872834928 Question Type : MCQ Option Shuffling : Yes Display Question Number : Yes Is Question Mandatory : No Calculator : None Response Time : N.A Think Time : N.A Minimum Instruction Time : 0

Correct Marks : 1 Wrong Marks : 0

The instrument which is useful to measure the volume of a stone

پتھر کی حجم کو ناپنے کے لئے کون سا آلہ کار آمد ہوگا

Options :

measuring Jar

1. ✔ پیمائش جار

graph paper

2. ✘ گراف پیپر

barometer

3. ✘ باریمیا

galvanometer

4. ✘ گلو نو میٹر

Question Number : 23 Question Id : 872834929 Question Type : MCQ Option Shuffling : Yes Display Question Number : Yes Is Question Mandatory : No Calculator : None Response Time : N.A Think Time : N.A Minimum Instruction Time : 0

Correct Marks : 1 Wrong Marks : 0


Which of the following symbol indicates fuse in an electric circuit


درج ذیل کونسی علامت الیکٹرک سرکٹ میں فیوز کو ظاہر کرتی ہے

Options :

1. ✘ 

2. ✘ 

3. ✔ 

4. ✘ 

Question Number : 24 Question Id : 872834930 Question Type : MCQ Option Shuffling : Yes Display Question Number : Yes Is Question Mandatory : No Calculator : None Response Time : N.A Think Time : N.A Minimum Instruction Time : 0

Correct Marks : 1 Wrong Marks : 0

Which of the following is a field force

درج ذیل میں فیئلڈ قوت ہے

Options :

Muscular force

1. ✘ عضلاتی قوت

Magnetic force

2. ✓ مقناطیسی قوت

Frictional force

3. ✗ رگڑ کی قوت

Tension force

4. ✗ ٹینشن قوت

Question Number : 25 Question Id : 872834931 Question Type : MCQ Option Shuffling : Yes Display Question Number : Yes Is Question Mandatory : No Calculator : None Response Time : N.A Think Time : N.A Minimum Instruction Time : 0

Correct Marks : 1 Wrong Marks : 0

Among the following, Sound can travel through

a). Wood b). Water c). Vacuum d). Air

درج ذیل میں سے ، آواز سفر طے کر سکتی ہے

(a) لکڑی (b) پانی (c) خلا (d) ہوا

Options :

1. ✗ a,b,c

2. ✗ b,c,d

3. ✓ a,b,d

4. ✗ a,c,d

Question Number : 26 Question Id : 872834932 Question Type : MCQ Option Shuffling : Yes Display Question Number : Yes Is Question Mandatory : No Calculator : None Response Time : N.A Think Time : N.A Minimum Instruction Time : 0

Correct Marks : 1 Wrong Marks : 0

Which of the following letter does not show lateral inversion in a plane mirror

ایک سادہ آئینہ میں درج ذیل کون سا حرف لفظی الٹاؤ کو ظاہر نہیں کرتا

Options :

1. ✗ B

2. ✓ A

3. ✗ D

4. ✖ C

Question Number : 27 Question Id : 872834933 Question Type : MCQ Option Shuffling : Yes Display Question Number : Yes Is Question Mandatory : No Calculator : None Response Time : N.A Think Time : N.A Minimum Instruction Time : 0

Correct Marks : 1 Wrong Marks : 0

Which of the following is an acid?

درج ذیل کونسی چیز ترشہ ہے؟

Options :

1. ✓ CH_3COOH

2. ✖ $NaOH$

3. ✖ NH_4OH

4. ✖ KOH

Question Number : 28 Question Id : 872834934 Question Type : MCQ Option Shuffling : Yes Display Question Number : Yes Is Question Mandatory : No Calculator : None Response Time : N.A Think Time : N.A Minimum Instruction Time : 0

Correct Marks : 1 Wrong Marks : 0

Which of the following is a chemical displacement reaction

درج ذیل میں کونسا کیمیائی انتقالی تعامل ہے؟

Options :

1. ✖ $2Mg + O_2 \rightarrow 2MgO$

2. ✖ $2AgBr \rightarrow 2Ag + Br_2$

3. ✖ $NaOH + HCl \rightarrow NaCl + H_2O$

4. ✓ $Fe + CuSO_4 \rightarrow FeSO_4 + Cu$

Question Number : 29 Question Id : 872834935 Question Type : MCQ Option Shuffling : Yes Display Question Number : Yes Is Question Mandatory : No Calculator : None Response Time : N.A Think Time : N.A Minimum Instruction Time : 0

Correct Marks : 1 Wrong Marks : 0

Which of the following is heterogeneous mixture

درج ذیل میں مختلف مکسچر ہے؟

Options :

Salt + water

1. ✘ نمک + پانی

Sugar + Water

2. ✘ شکر + پانی

Alcohol + Water

3. ✘ الکوہل + پانی

Oil + Water

4. ✔ تیل + پانی

Question Number : 30 Question Id : 872834936 Question Type : MCQ Option Shuffling : Yes Display Question Number : Yes Is Question Mandatory : No Calculator : None Response Time : N.A Think Time : N.A Minimum Instruction Time : 0

Correct Marks : 1 Wrong Marks : 0

Which of the following is known as liquid gold?

درج ذیل میں سے مائع سونا کہتے ہیں؟

Options :

Paraffin wax

1. ✘ پارافن موم

Diesel

2. ✘ ڈیزل

Kerosene

3. ✘ کیروسین

Petroleum

4. ✔ پٹرولیم

Question Number : 31 Question Id : 872834937 Question Type : MCQ Option Shuffling : Yes Display Question Number : Yes Is Question Mandatory : No Calculator : None Response Time : N.A Think Time : N.A Minimum Instruction Time : 0

Correct Marks : 1 Wrong Marks : 0

Identify the incorrect pair of vitamins and their deficiency diseases

درج ذیل میں وٹامن اور ان سے ہونے والی کمی کے غلط جوڑ کی نشاندہی کیجئے

Options :

Biotin – Nervous disorders

1. ✘ بائیوٹن۔ اعصابی بیماری

Niacin – glossitis

2. ✔ نیاسن۔ گلو سیٹس

Pyridoxine – Anemia

3. ✘ پائیریکسین۔ اینیمیا

Ascorbic acid – Scurvy

4. ✘ اسکوربک تریشہ۔ اسکوردی

Question Number : 32 Question Id : 872834938 Question Type : MCQ Option Shuffling : Yes Display Question Number : Yes Is Question Mandatory : No Calculator : None Response Time : N.A Think Time : N.A Minimum Instruction Time : 0

Correct Marks : 1 Wrong Marks : 0

Which of these sanctuaries is located in Jayashankar Bhupalapalli district?

درج ذیل کون سی پناہ گاہ ہے شکر بھوپالا پالی ضلع میں واقع ہے

Options :

Eturunagaram Sanctuary

1. ✔ ایٹورنگرم پناہ گاہ

Kawal sanctuary

2. ✘ کاوال پناہ گاہ

Pakala sanctuary

3. ✘ پاکالا پناہ گاہ

Kinnerasani sanctuary

4. ✘ کینرسانی پناہ گاہ

Question Number : 33 Question Id : 872834939 Question Type : MCQ Option Shuffling : Yes Display Question Number : Yes Is Question Mandatory : No Calculator : None Response Time : N.A Think Time : N.A Minimum Instruction Time : 0

Correct Marks : 1 Wrong Marks : 0

The Human digestive system is incapable of digesting

انسانی نظام ہاضمہ اس چیز کو ہضم کرنے کے قابل نہیں ہے

Options :

Lipids

1. ✘ لیپڈ

Roughages

2. ✔ ریفیجس

Proteins

3. ✘ پروٹین

Starch

4. ✘ اسٹارچ

Question Number : 34 Question Id : 872834940 Question Type : MCQ Option Shuffling : Yes Display Question Number : Yes Is Question Mandatory : No Calculator : None Response Time : N.A Think Time : N.A Minimum Instruction Time : 0

Correct Marks : 1 Wrong Marks : 0

Identify the correct sequence of ovum movement in the female reproductive tract from the following

درج ذیل میں خواتین کے نظام تولید میں بیضہ کی حرکت کی صحیح ترتیب کی نشاندہی کیجئے

Options :

Ovary → fallopian tube → uterus → cervix → vagina

1. ✔ بیضہ وانی ← فیلوپین ٹیوب ← رحم ← سروکس ← فرج

Ovary → uterus → fallopian tube → cervix → vagina

2. ✘ بیضہ وانی ← رحم ← فیلوپین ٹیوب ← سروکس ← فرج

Ovary → uterus → cervix → fallopian tube → vagina

3. ✘ بیضہ وانی ← رحم ← سروکس ← فیلوپین ٹیوب ← فرج

Ovary → fallopian tube → cervix → uterus → vagina

4. ✘ بیضہ وانی ← فیلوپین ٹیوب ← سروکس ← رحم ← فرج

Question Number : 35 Question Id : 872834941 Question Type : MCQ Option Shuffling : Yes Display Question Number : Yes Is Question Mandatory : No Calculator : None Response Time : N.A Think Time : N.A Minimum Instruction Time : 0

Correct Marks : 1 Wrong Marks : 0

The cells produce antibodies to kill pathogens in our body are

وہ خلیے جو ہمارے جسم میں دافع جسم کو پیدا کرتے ہیں تاکہ یہیتھو جنس کو مار سکیں

Options :

Lymphocytes

1. ✓ لیمفوسائٹس

Erythrocytes

2. ✗ اریٹھروسائٹس

Monocytes

3. ✗ مونوسائٹس

Thrombocytes

4. ✗ تھرمبوسائٹس

Question Number : 36 Question Id : 872834942 Question Type : MCQ Option Shuffling : Yes Display Question Number : Yes Is Question Mandatory : No Calculator : None Response Time : N.A Think Time : N.A Minimum Instruction Time : 0

Correct Marks : 1 Wrong Marks : 0

Which of the following animals are not cold blooded?

درج ذیل کون سے جانور سرد خون والے نہیں ہیں

Options :

Fish

1. ✗ مچھلی

Crocodile

2. ✗ گمرچھ

Dolphin

3. ✓ ڈالفن

Frog

4. ✗ مینڈک

Question Number : 37 Question Id : 872834943 Question Type : MCQ Option Shuffling : Yes Display Question Number : Yes Is Question Mandatory : No Calculator : None Response Time : N.A Think Time : N.A Minimum Instruction Time : 0

Correct Marks : 1 Wrong Marks : 0

The number of salivary glands in Human buccal cavity

انسان کے منہ میں العابی غدود کے کتنے جوڑ ہوتے ہیں

Options :

3 Pairs

1. ✓ 3 جوڑ

4 pairs

2. ✗ 4 جوڑ

2 Pairs

3. ✗ 2 جوڑ

5 Pairs

4. ✗ 5 جوڑ

Question Number : 38 Question Id : 872834944 Question Type : MCQ Option Shuffling : Yes Display Question Number : Yes Is Question Mandatory : No Calculator : None Response Time : N.A Think Time : N.A Minimum Instruction Time : 0

Correct Marks : 1 Wrong Marks : 0

Water vascular system also acts as excretory system in animals belong to phylum

پانی کا عروقی نظام درج ذیل فیلم کے جانوروں میں اخراجی نظام کے طور پر بھی کام کرتا ہے

Options :

Mollusca

1. ✗ مولسکا

Arthropoda

2. ✗ آرٹھروپوڈا

Annelida

3. ✗ اینیلیڈا

Echinodermata

4. ✓ ایکانوڈرمیٹا

Question Number : 39 Question Id : 872834945 Question Type : MCQ Option Shuffling : Yes Display Question Number : Yes Is Question Mandatory : No Calculator : None Response Time : N.A Think Time : N.A Minimum Instruction Time : 0

Correct Marks : 1 Wrong Marks : 0

Identify the incorrect sentence from the following

درج ذیل میں غلط جملے کی نشاندہی کیجئے

Options :

Electricity is also produced from the air and tides of the oceans

1. ✘

الکٹریسیٹی ہو اور سمندروں کے مدوجز سے بھی تیار کی جاتی ہے

The radioactive wastes possess radioactivity for at least one million years

2. ✘

تابکاری فضلہ میں تابکاری ایک ملین سالوں تک قائم رہتی ہے

Non-biodegradable waste consists mainly of Human and animal waste

3. ✓

نان۔ بائیو ڈیگریدیبیل فضلہ میں زیادہ تر انسانوں اور جانوروں کا فضلہ شامل رہتا ہے

Organic carbon is converted to carbon dioxide and water, which can cause atmospheric pollution and acid rain

4. ✘

آرگنک کاربن ڈائی آکسائیڈ اور پانی میں تبدیل ہوتی ہے جو فضائی آلودگی اور ترشہ بارش کا سبب بنتا ہے

Question Number : 40 Question Id : 872834946 Question Type : MCQ Option Shuffling : Yes Display Question Number : Yes Is Question Mandatory : No Calculator : None Response Time : N.A Think Time : N.A Minimum Instruction Time : 0

Correct Marks : 1 Wrong Marks : 0

The experiment given in the picture illustrates



دی گئی تصویر میں یہ ظاہر ہوتا ہے

Options :

Release of carbon dioxide during respiration

1. ✓ سانس لینے کے دوران کاربن ڈائی آکسائیڈ کا اخراج

Release of oxygen during respiration

2. ✗ سانس لینے کے دوران آکسیجن کا اخراج

Release of Heat during respiration

3. ✗ سانس لینے کے دوران تپش کا اخراج

Release of oxygen during photosynthesis

4. ✗ شعاعی ترکیب کے دوران آکسیجن کا اخراج

Question Number : 41 Question Id : 872834947 Question Type : MCQ Option Shuffling : Yes Display Question Number : Yes Is Question Mandatory : No Calculator : None Response Time : N.A Think Time : N.A Minimum Instruction Time : 0

Correct Marks : 1 Wrong Marks : 0

The Coastal region spread in the State of Goa is

ریاست گوا میں ساحلی علاقہ کا پھیلاؤ یہاں تک ہے

Options :

Canara Coast

1. ✗ کنارا ساحل

Utkal Coast

2. ✗ اٹکل ساحل

Konkan Coast

3. ✓ کونکن ساحل

Malabar Coast

4. ✗ ملابار ساحل

Question Number : 42 Question Id : 872834948 Question Type : MCQ Option Shuffling : Yes Display Question Number : Yes Is Question Mandatory : No Calculator : None Response Time : N.A Think Time : N.A Minimum Instruction Time : 0

Correct Marks : 1 Wrong Marks : 0

The urban areas having population between One Lakh and Ten Lakhs are

وہ سنہری علاقے جن کی آبادی ایک لاکھ تا دس لاکھ کے درمیان ہو، کہلاتے ہیں

Options :

Mega cities

1. ✘ میگا شہر

Class 1 cities

2. ✔ کلاس I شہر

Metropolitan cities

3. ✘ میٹروپولیٹین شہر

Towns

4. ✘ ٹاؤن

Question Number : 43 Question Id : 872834949 Question Type : MCQ Option Shuffling : Yes Display Question Number : Yes Is Question Mandatory : No Calculator : None Response Time : N.A Think Time : N.A Minimum Instruction Time : 0

Correct Marks : 1 Wrong Marks : 0

If the time at 45° East longitude is 10:00 am, then the time at 30° West longitude is

اگر 45° مشرقی طول البلد پر صبح کے دس بج رہے ہوں تب 30° مغربی طول البلد پر کیا وقت ہوگا؟

Options :

5:00 am

1. ✔ 5:00 بجے صبح

3:00 pm

2. ✘ 3:00 بجے شام

3:00 am

3. ✘ 3:00 بجے صبح

5:00 pm

4. ✘ 5:00 بجے شام

Question Number : 44 Question Id : 872834950 Question Type : MCQ Option Shuffling : Yes Display Question Number : Yes Is Question Mandatory : No Calculator : None Response Time : N.A Think Time : N.A Minimum Instruction Time : 0

Correct Marks : 1 Wrong Marks : 0

The layer in the heterosphere is

وہ پرت جو ہیمٹرواسفر میں ہے

Options :

Stratosphere

1. ✘ اسٹرواسفر

Mesosphere

2. ✘ میسواسفر

Troposphere

3. ✘ ٹروپوسفر

Thermosphere

4. ✔ تھرمواسفر

Question Number : 45 Question Id : 872834951 Question Type : MCQ Option Shuffling : Yes Display Question Number : Yes Is Question Mandatory : No Calculator : None Response Time : N.A Think Time : N.A Minimum Instruction Time : 0

Correct Marks : 1 Wrong Marks : 0

These are represented by 'dark grey' colour in the Maps

نقشوں میں ان علاقوں کو گہرے سرمئی رنگ میں ظاہر کیا جاتا ہے

Options :

Cropped area

1. ✘ فصل والے علاقے

Wastelands

2. ✘ بیکار زمین

Mountains

3. ✔ پہاڑ

Hills

4. ✘ ہلز

Question Number : 46 Question Id : 872834952 Question Type : MCQ Option Shuffling : Yes Display Question Number : Yes Is Question Mandatory : No Calculator : None Response Time : N.A Think Time : N.A Minimum Instruction Time : 0

Correct Marks : 1 Wrong Marks : 0

The Mandal Commission recommended reservation for these people

منڈل کمیشن نے ان لوگوں کے لئے ریزرویشن کی سفارش کی

Options :

Other backward classes

1. ✓ دیگر پسماندہ طبقات

Upper classes

2. ✗ اعلیٰ طبقات

Minorities

3. ✗ اقلیتیں

Scheduled castes

4. ✗ شیڈولڈ ذات

Question Number : 47 Question Id : 872834953 Question Type : MCQ Option Shuffling : Yes Display Question Number : Yes Is Question Mandatory : No Calculator : None Response Time : N.A Think Time : N.A Minimum Instruction Time : 0

Correct Marks : 1 Wrong Marks : 0

This was not a cause of discontent among the people of Telangana before the formation of the State

ریاست کی تشکیل سے قبل تلنگانہ کے عوام کے غیر اطمینانی کا یہ سبب نہیں تھا

Options :

The Chief Ministers were from Rayalaseema

1. ✓ وزراء اعلیٰ رانلسیماعلاقہ سے ہوتے تھے

Diversion of surplus revenue from Telangana to other regions of the State

2. ✗ تلنگانہ سے حاصل کردہ ریونیوریاست کے دیگر علاقوں کو بھیج دی جاتی تھی

Discrimination in employment in government sector

3. ✗ سرکاری شعبہ میں روزگار میں امتیاز برتاجاتا تھا

Granting of domicile status to coastal Andhra persons working in Telangana Region

4. ✗ تلنگانہ میں رہائش پذیر آندھرائی افراد کو مستقل رہائش کا موقف دی دیا جاتا تھا

Question Number : 48 Question Id : 872834954 Question Type : MCQ Option Shuffling : Yes Display Question Number : Yes Is Question Mandatory : No Calculator : None Response Time : N.A Think Time : N.A Minimum Instruction Time : 0

Correct Marks : 1 Wrong Marks : 0

The king who dissolved parliament and ruled without parliament in England was

انگلینڈ میں وہ بادشاہ جس نے پارلیمنٹ کو تحلیل کرایا اور بغیر پارلیمنٹ حکومت کی

Options :

James – 1

1. ✘ جیمس اول

Charles – 1

2. ✔ چارلس اول

William of Orange

3. ✘ ولیم آف آرنج

Louis – XVI

4. ✘ کولس۔ سولواں

Question Number : 49 Question Id : 872834955 Question Type : MCQ Option Shuffling : Yes Display Question Number : Yes Is Question Mandatory : No Calculator : None Response Time : N.A Think Time : N.A Minimum Instruction Time : 0

Correct Marks : 1 Wrong Marks : 0

The foreign traveller who visited Rudramadevi Kingdom was

وہ بیرونی سیاح جس نے ردرمادیوی ریاست کا دورہ کیا

Options :

Nuniz

1. ✘ نونیز

Abdul Razzak

2. ✘ عبدالرزاق

Domingo Paes

3. ✘ ڈومنگو پائس

Marco Polo

4. ✔ مارکو پولو

Question Number : 50 Question Id : 872834956 Question Type : MCQ Option Shuffling : Yes Display Question Number : Yes Is Question Mandatory : No Calculator : None Response Time : N.A Think Time : N.A Minimum Instruction Time : 0

Correct Marks : 1 Wrong Marks : 0

The Mahajanapada that had republican form of government was

وہ مہاجن پداجہاں ریپبلکن قسم کی حکومت تھی

Options :

Magadha

1. ✘ مگدھ

Kosala

2. ✘ کوسالہ

Gandhara

3. ✘ گندھارا

Vajji

4. ✔ وِجّی

Question Number : 51 Question Id : 872834957 Question Type : MCQ Option Shuffling : Yes Display Question Number : Yes Is Question Mandatory : No Calculator : None Response Time : N.A Think Time : N.A Minimum Instruction Time : 0

Correct Marks : 1 Wrong Marks : 0

The Constituent Assembly adopted the constitution on

مجلس دستور نے دستور کو نافذ کیا

Options :

26th November, 1949

1. ✔ 26 نومبر 1949

26th January, 1950

2. ✘ 26 جنوری 1950

26th November, 1928

3. ✘ 26 نومبر 1928

26th January, 1949

4. ✘ 26 جنوری 1949

Question Number : 52 Question Id : 872834958 Question Type : MCQ Option Shuffling : Yes Display Question Number : Yes Is Question Mandatory : No Calculator : None Response Time : N.A Think Time : N.A Minimum Instruction Time : 0

Correct Marks : 1 Wrong Marks : 0

This is not included in the concurrent list

مشترکہ فہرست میں یہ شامل نہیں ہے

Options :

Industries

1. ✘ صنعتیں

Irrigation

2. ✔ آب پاشی

Electricity

3. ✘ الیکٹرکٹی

Factories

4. ✘ فیکٹریز

Question Number : 53 Question Id : 872834959 Question Type : MCQ Option Shuffling : Yes Display Question Number : Yes Is Question Mandatory : No Calculator : None Response Time : N.A Think Time : N.A Minimum Instruction Time : 0

Correct Marks : 1 Wrong Marks : 0

This is not a part of the right to equality

حق برائے مساوات کا یہ حصہ نہیں ہے

Options :

Abolition of Untouchability

1. ✘ چھوت چھات کا خاتمہ

Abolition of Title

2. ✘ خطابات کا خاتمہ

Right to life

3. ✔ حق برائے زندگی

Equality of opportunities

4. ✘ مساوی مواقع

Question Number : 54 Question Id : 872834960 Question Type : MCQ Option Shuffling : Yes Display Question Number : Yes Is Question Mandatory : No Calculator : None Response Time : N.A Think Time : N.A Minimum Instruction Time : 0

Correct Marks : 1 Wrong Marks : 0

An Officer who conducts and supervises the election in a constituency is

کس حلقہ انتخاب میں یہ آفیسر جو انتخابات کو منعقد کرتا اور نگرانی کرتا ہے

Options :

Polling Officer

1. ✘ پولنگ آفیسر

Returning Officer

2. ✔ ریٹرننگ آفیسر

Presiding Officer

3. ✘ پراسائیڈنگ آفیسر

State Chief Election Officer

4. ✘ اسٹیٹ چیف الیکشن آفیسر

Question Number : 55 Question Id : 872834961 Question Type : MCQ Option Shuffling : Yes Display Question Number : Yes Is Question Mandatory : No Calculator : None Response Time : N.A Think Time : N.A Minimum Instruction Time : 0

Correct Marks : 1 Wrong Marks : 0

The State in which 'Silent Valley movement' started is

وہ ریاست جہاں 'سائلنٹ ویلی تحریک' شروع ہوئی

Options :

Madhya Pradesh

1. ✘ مدھیہ پردیش

Tamil Nadu

2. ✘ تامل ناڈو

Kerala

3. ✔ کیرالہ

Gujarat

4. ✘ گجرات

Question Number : 56 Question Id : 872834962 Question Type : MCQ Option Shuffling : Yes Display Question Number : Yes Is Question Mandatory : No Calculator : None Response Time : N.A Think Time : N.A Minimum Instruction Time : 0

Correct Marks : 1 Wrong Marks : 0

This does not belong to Community, Social and personal services

اس کا تعلق کمیونٹی، سماجی اور ذاتی خدمات سے نہیں ہے

Options :

Defence

1. ✘ دفاع

Library

2. ✘ لائبریری

Media

3. ✘ میڈیا

Services of brokers

4. ✔ بروکرز کی خدمات

Question Number : 57 Question Id : 872834963 Question Type : MCQ Option Shuffling : Yes Display Question Number : Yes Is Question Mandatory : No Calculator : None Response Time : N.A Think Time : N.A Minimum Instruction Time : 0

Correct Marks : 1 Wrong Marks : 0

The portion of India's population to whom the National Food Security Act applies is

ہندوستان کی آبادی کا وہ تناسب جن پر نیشنل فوڈ سیکورٹی ایکٹ لاگو ہوتا ہے

Options :

$\frac{3}{4}$

1. ✘ $\frac{3}{4}$ واں حصہ

$\frac{2}{3}$

2. ✔ $\frac{2}{3}$ حصہ

$\frac{1}{2}$

3. ✘ $\frac{1}{2}$ حصہ

1/4

4. ✖ حصہ 1/4

Question Number : 58 Question Id : 872834964 Question Type : MCQ Option Shuffling : Yes Display Question Number : Yes Is Question Mandatory : No Calculator : None Response Time : N.A Think Time : N.A Minimum Instruction Time : 0

Correct Marks : 1 Wrong Marks : 0

The investment that is spent on the raw material to complete the production

وہ سرمایہ کاری جو اشیاء پر خرچ کی جاتی ہے تاکہ پیداوار کو مکمل کیا جاسکے

Options :

Fixed capital

1. ✖ فکسڈ کیپٹل

Physical capital

2. ✖ فزیکل کیپٹل

Working capital

3. ✔ ورکنگ کیپٹل

Loan

4. ✖ قرض

Question Number : 59 Question Id : 872834965 Question Type : MCQ Option Shuffling : Yes Display Question Number : Yes Is Question Mandatory : No Calculator : None Response Time : N.A Think Time : N.A Minimum Instruction Time : 0

Correct Marks : 1 Wrong Marks : 0

Goods and Services Tax (GST) was introduced in India in the year:

ہندوستان میں ایشیا اور خدمات ٹیکس (GST) کو اس سال شروع کیا گیا

Options :

1. ✔ 2017

2. ✖ 2016

3. ✖ 2018

4. ✖ 2015

Question Number : 60 Question Id : 872834966 Question Type : MCQ Option Shuffling : Yes Display Question Number

: Yes Is Question Mandatory : No Calculator : None Response Time : N.A Think Time : N.A Minimum Instruction Time : 0

Correct Marks : 1 Wrong Marks : 0

There are no restrictions on the number of times you can deposit and withdraw the money from the following Account:

درج ذیل کس اکاؤنٹ سے آپ کتنے ہی بار رقم کو جمع کر سکتے ہیں۔ اور نکال سکتے ہیں؟ اس کے لئے کوئی تحدیدات نہیں ہیں

Options :

Fixed deposits

1. ✘ فکسڈ ڈپازٹ

Basic Saving Bank deposit Account

2. ✘ بیسک سیونگ بنک ڈپازٹ اکاؤنٹ

Recurring Deposit Account

3. ✘ ریکرنگ ڈپازٹ اکاؤنٹ

Current Account

4. ✔ کرنٹ اکاؤنٹ

Teaching Aptitude

Section Id :	87283432
Section Number :	2
Section type :	Online
Mandatory or Optional :	Mandatory
Number of Questions :	20
Number of Questions to be attempted :	20
Section Marks :	20
Enable Mark as Answered Mark for Review and Clear Response :	Yes
Maximum Instruction Time :	0
Sub-Section Number :	1
Sub-Section Id :	87283438
Question Shuffling Allowed :	Yes

Question Number : 61 Question Id : 872834967 Question Type : MCQ Option Shuffling : Yes Display Question Number : Yes Is Question Mandatory : No Calculator : None Response Time : N.A Think Time : N.A Minimum Instruction Time : 0

Correct Marks : 1 Wrong Marks : 0

The most effective method of teaching is

تدیس کا سب سے موثر طریقہ ہے

Options :

Lecture method

1. ✘ لکچر کا طریقہ

Demonstration method

2. ✘ مظاہراتی طریقہ

Experimental method

3. ✘ تجرباتی طریقہ

Experiential method

4. ✔ آموزشی طریقہ

Question Number : 62 Question Id : 872834968 Question Type : MCQ Option Shuffling : Yes Display Question Number : Yes Is Question Mandatory : No Calculator : None Response Time : N.A Think Time : N.A Minimum Instruction Time : 0

Correct Marks : 1 Wrong Marks : 0

Teachers relationship with students should be

معلم کا طلباء کے ساتھ اس طرح تعلق ہونا چاہئے

Options :

empathetic

1. ✔ غمخواری

friendly

2. ✘ دوستانہ

sympathetic

3. ✘ ہمدردانہ

punitive

4. ✘ سزا دینے والا

Question Number : 63 Question Id : 872834969 Question Type : MCQ Option Shuffling : Yes Display Question Number : Yes Is Question Mandatory : No Calculator : None Response Time : N.A Think Time : N.A Minimum Instruction Time : 0

Correct Marks : 1 Wrong Marks : 0

The real goal of education is

تعلیم کا حقیقی مقصد ہے

Options :

securing diploma or certificate

1. ✘ ڈپلوما یا سرٹیفکیٹ کا حصول

mastery of subject matter

2. ✘ مضمون پر عبور

acquisition of knowledge, skills and values

3. ✔ علم، مہارتوں اور اقدار کا حصول

training to make a living

4. ✘ روزگار حاصل کرنے کی تربیت

Question Number : 64 Question Id : 872834970 Question Type : MCQ Option Shuffling : Yes Display Question Number : Yes Is Question Mandatory : No Calculator : None Response Time : N.A Think Time : N.A Minimum Instruction Time : 0

Correct Marks : 1 Wrong Marks : 0

The source of educational objectives is

تعلیمی مقاصد کا ذریعہ ہے

Options :

Educational psychology

1. ✘ تعلیمی نفسیات

human experiences

2. ✔ انسانی تجربات

colleges of education

3. ✘ تعلیم کے کالجوں

professional organizations

4. ✘ پیشہ وارانہ ادارے

Question Number : 65 Question Id : 872834971 Question Type : MCQ Option Shuffling : Yes Display Question Number : Yes Is Question Mandatory : No Calculator : None Response Time : N.A Think Time : N.A Minimum Instruction Time : 0

Correct Marks : 1 Wrong Marks : 0

Which of the following is not correct

درج ذیل میں کون سا بیان صحیح نہیں ہے؟

Options :

education for life

1. ✘ تعلیم برائے زندگی

education through life

2. ✘ زندگی کے ذریعے تعلیم

education throughout life

3. ✘ تمام تر زندگی کے لئے تعلیم

education for job

4. ✔ تعلیم برائے جاب

Question Number : 66 Question Id : 872834972 Question Type : MCQ Option Shuffling : Yes Display Question Number : Yes Is Question Mandatory : No Calculator : None Response Time : N.A Think Time : N.A Minimum Instruction Time : 0

Correct Marks : 1 Wrong Marks : 0

When you make a mistake in the class, you would

جب آپ کمرہ جماعت میں غلطی کرتے ہیں، تو آپ کریہ کرنا چاہیے

Options :

forget the mistake

1. ✘ غلطی کو بھول جانا چاہئے

acknowledge the mistake

2. ✔ غلطی کو مان لینا چاہئے

ignore the mistake

3. ✘ غلطی کو درگزر کر دینا چاہئے

convince the students

4. ✘ طلباء کو قائل کرانا چاہئے

Question Number : 67 Question Id : 872834973 Question Type : MCQ Option Shuffling : Yes Display Question Number : Yes Is Question Mandatory : No Calculator : None Response Time : N.A Think Time : N.A Minimum Instruction Time

: 0

Correct Marks : 1 Wrong Marks : 0

Which of the following is the highest priority to the teacher ?

درج ذیل میں استاد کے لئے سب سے اہمیت کی حامل کون سی چیز ہے؟

Options :

Maintain discipline in class

1. ✘ کلاس میں ڈسپلین قائم رکھنا

Conduct examination and give feedback

2. ✘ امتحانات منعقد کرنا اور فیڈبیک دینا

Make students prepare assignments

3. ✘ طلباء سے تفویضات تیار کروانا

Develop the skill of learning how to learn

4. ✔ اکتساب کس طرح حاصل کرنا چاہئے اسکی مہارت کو سکھانا

Question Number : 68 Question Id : 872834974 Question Type : MCQ Option Shuffling : Yes Display Question Number : Yes Is Question Mandatory : No Calculator : None Response Time : N.A Think Time : N.A Minimum Instruction Time : 0

Correct Marks : 1 Wrong Marks : 0

A generalized idea suggested to the individual by object, symbol or situation

ایک عمومی خیال جو کسی فرد کو کسی شے، علامت یا حالات کے ذریعے بتایا جاتا ہے

Options :

Concept

1. ✔ تصور

Generalization

2. ✘ تعمیم

theory

3. ✘ نظریہ

principle

4. ✘ اصول

Question Number : 69 Question Id : 872834975 Question Type : MCQ Option Shuffling : Yes Display Question Number

: Yes Is Question Mandatory : No Calculator : None Response Time : N.A Think Time : N.A Minimum Instruction Time : 0

Correct Marks : 1 Wrong Marks : 0

Short term targets which are specific in nature and achieved in a few hours or days is

وہ مختصر مدتی اہداف جو اپنی ماہیت میں خاص ہوتے ہیں اور چند گھنٹوں یا دنوں میں حاصل کئے جاتے ہیں

Options :

goals

1. ✘ اہداف

aims

2. ✘ اغراض

objectives

3. ✔ مقاصد

education

4. ✘ تعلیم

Question Number : 70 Question Id : 872834976 Question Type : MCQ Option Shuffling : Yes Display Question Number : Yes Is Question Mandatory : No Calculator : None Response Time : N.A Think Time : N.A Minimum Instruction Time : 0

Correct Marks : 1 Wrong Marks : 0

What is more important while writing on a blackboard

بلیک بورڈ پر لکھتے وقت سب سے زیادہ کیا اہم ہے؟

Options :

neat writing

1. ✘ صفائی سے لکھنا

legible writing

2. ✔ واضح لکھنا

writing in big letters

3. ✘ بڑے حروف میں لکھنا

writing in small letters

4. ✘ چھوٹے حروف میں لکھنا

Question Number : 71 Question Id : 872834977 Question Type : MCQ Option Shuffling : Yes Display Question Number : Yes Is Question Mandatory : No Calculator : None Response Time : N.A Think Time : N.A Minimum Instruction Time : 0

Correct Marks : 1 Wrong Marks : 0

Why have you chosen teaching profession?

آپ نے تدریسی پیشہ کو کیوں منتخب کیا ہے؟

Options :

It has less responsibility

1. ✘ اس میں کم ذمہ داری ہوتی ہے

You have interest in teaching

2. ✔ آپ کو اس میں دلچسپی ہے

It has less wok

3. ✘ اس میں کام کم ہوتا ہے

It has more holidays

4. ✘ اس میں تعطیلات زیادہ ہوتی ہیں

Question Number : 72 Question Id : 872834978 Question Type : MCQ Option Shuffling : Yes Display Question Number : Yes Is Question Mandatory : No Calculator : None Response Time : N.A Think Time : N.A Minimum Instruction Time : 0

Correct Marks : 1 Wrong Marks : 0

The important quality of a good teacher is

ایک اچھے استاد کی اہم خصوصیت

Options :

good communication skills

1. ✔ گفتگو کی اچھی مہارتیں

concern for students' welfare

2. ✘ طلباء کی بھلائی کے تئیں فکر مندی

effective leadership qualities

3. ✘ موثر قائدانہ خصوصیات

sound knowledge of subject matter

4. ✘ مضمون پر اچھی معلومات

Question Number : 73 Question Id : 872834979 Question Type : MCQ Option Shuffling : Yes Display Question Number : Yes Is Question Mandatory : No Calculator : None Response Time : N.A Think Time : N.A Minimum Instruction Time : 0

Correct Marks : 1 Wrong Marks : 0

To develop cooperation and team spirit among students which activity do you propose

طلباء میں تعاون اور ٹیم اسپرٹ کو فروغ دینے آپ کس سرگرمی کو تجویز کریں گے

Options :

Debate

1. ✘ بحث و مباحثہ

Quiz

2. ✘ کوئز

Art

3. ✘ آرٹ

Project work

4. ✔ پروجیکٹ ورک

Question Number : 74 Question Id : 872834980 Question Type : MCQ Option Shuffling : Yes Display Question Number : Yes Is Question Mandatory : No Calculator : None Response Time : N.A Think Time : N.A Minimum Instruction Time : 0

Correct Marks : 1 Wrong Marks : 0

Verbal guidance is not so effective in learning of

اس چیز کے سیکھنے میں زبانی رہنمائی زیادہ موثر نہیں ہوتی

Options :

aptitude

1. ✘ رجحان

skills

2. ✔ مہارتیں

intelligence

3. ✘ ذہانت

attitude

4. ✖ رویہ

Question Number : 75 Question Id : 872834981 Question Type : MCQ Option Shuffling : Yes Display Question Number : Yes Is Question Mandatory : No Calculator : None Response Time : N.A Think Time : N.A Minimum Instruction Time : 0

Correct Marks : 1 Wrong Marks : 0

Important quality in a student is

ایک طالب علم کی اہم خصوصیت ہے

Options :

hardworking nature

1. ✖ محنت کرنے کی فطرت

obedience

2. ✖ فرمانبرداری

humanistic attitude

3. ✖ انسانی رویہ

independent thinking

4. ✔ آزادانہ سوچ

Question Number : 76 Question Id : 872834982 Question Type : MCQ Option Shuffling : Yes Display Question Number : Yes Is Question Mandatory : No Calculator : None Response Time : N.A Think Time : N.A Minimum Instruction Time : 0

Correct Marks : 1 Wrong Marks : 0

In 21st century, education focuses on development of

اکیسویں صدی میں، تعلیم اس کے فروغ پر توجہ مرکوز کرتی ہے

Options :

social learning

1. ✖ سماجی اکتساب

intellectual learning

2. ✖ ذہانتی اکتساب

emotional learning

3. ✖ جذباتی اکتساب

socio-emotional learning

4. ✓ سماجی و جذباتی اکتساب

Question Number : 77 Question Id : 872834983 Question Type : MCQ Option Shuffling : Yes Display Question Number : Yes Is Question Mandatory : No Calculator : None Response Time : N.A Think Time : N.A Minimum Instruction Time : 0

Correct Marks : 1 Wrong Marks : 0

Broadly education means development of

وسیع معنوں میں تعلیم سے مراد اس کا فروغ ہے

Options :

human intelligence

1. ✘ انسانی ذہانت

human resources

2. ✓ انسانی ذرائع

good humans

3. ✘ اچھے انسان

human activity

4. ✘ انسانی سرگرمیاں

Question Number : 78 Question Id : 872834984 Question Type : MCQ Option Shuffling : Yes Display Question Number : Yes Is Question Mandatory : No Calculator : None Response Time : N.A Think Time : N.A Minimum Instruction Time : 0

Correct Marks : 1 Wrong Marks : 0

The purpose of co-curricular activities is to

ہم نصابی سرگرمیوں کا مقصد ہوتا ہے

Options :

facilitate students development

1. ✓ طلباء کی نشوونما میں سہولت رسا ہونا

keep students from dropping out

2. ✘ طلباء کو ترک مدرسہ سے روکنا

prevent disciplinary problems

3. ✘ ڈسپلن سے متعلق مسائل کو روکنا

meet the demands of community

کیونہی کے ڈیمانڈز پورا کرنا

4. ✘

Question Number : 79 Question Id : 872834985 Question Type : MCQ Option Shuffling : Yes Display Question Number : Yes Is Question Mandatory : No Calculator : None Response Time : N.A Think Time : N.A Minimum Instruction Time : 0

Correct Marks : 1 Wrong Marks : 0

The effectiveness of learning depends upon

اكتساب کی موثریت اس پر منحصر ہوتی ہے

Options :

effective curriculum

موثر نصاب

1. ✘

effective methods of teaching

موثر طریقہ تدریس

2. ✔

effective discipline

موثر ڈسپلین

3. ✘

effective textbooks

موثر نصابی کتب

4. ✘

Question Number : 80 Question Id : 872834986 Question Type : MCQ Option Shuffling : Yes Display Question Number : Yes Is Question Mandatory : No Calculator : None Response Time : N.A Think Time : N.A Minimum Instruction Time : 0

Correct Marks : 1 Wrong Marks : 0

The full form of NEP 2020 is

NEP 2020 کی مکمل شکل ہے

Options :

1. ✘ National Education Programme 2020

2. ✔ National Education Policy 2020

3. ✘ New Education Policy 2020

4. ✘ Nation Education Programme 2020

General English

Section Id :	87283433
Section Number :	3
Section type :	Online
Mandatory or Optional :	Mandatory
Number of Questions :	16
Number of Questions to be attempted :	16
Section Marks :	20
Enable Mark as Answered Mark for Review and Clear Response :	Yes
Maximum Instruction Time :	0
Sub-Section Number :	1
Sub-Section Id :	87283439
Question Shuffling Allowed :	Yes

Question Id : 872834987 Question Type : COMPREHENSION Sub Question Shuffling Allowed : Yes Group Comprehension Questions : No Calculator : None Response Time : N.A Think Time : N.A Minimum Instruction Time : 0

Question Numbers : (81 to 85)

Read the passage carefully and answer the questions that follow:

The basic principle of Federalism is that the Legislative and Executive authority is partitioned between the Centre and the States not by any law to be made by the Centre but by the Constitution itself. This is what Constitution does. The States under our Constitution are in no way dependent upon the Centre for their legislative or executive authority. The Centre and the States are co-equal in this matter. It is difficult to see how such a Constitution can be called centralism. It may be that the Constitution assigns to the Centre too large a field for the operation of its legislative and executive authority than is to be found in any other federal Constitution. It may be that the residuary powers are given to the

Centre and not to the States. But these features do not form the essence of federalism. The chief mark of federalism as I said lies in the partition of the legislative and executive authority between the Centre and the Units by the Constitution. This is the principle embodied in our Constitution. There can be no mistake about it. It is, therefore, wrong to say that the States have been placed under the Centre. The Centre cannot by its own will alter the boundary of that partition. Nor can the Judiciary.

Sub questions

Question Number : 81 Question Id : 872834988 Question Type : MCQ Option Shuffling : Yes Display Question Number : Yes Is Question Mandatory : No Calculator : None Response Time : N.A Think Time : N.A Minimum Instruction Time : 0

Correct Marks : 1 Wrong Marks : 0

The passage is mainly about

Options :

1. ✘ The function of the Constitution
2. ✘ Division of powers
3. ✘ Centre-State relations
4. ✔ The spirit of Federalism

Question Number : 82 Question Id : 872834989 Question Type : MCQ Option Shuffling : Yes Display Question Number : Yes Is Question Mandatory : No Calculator : None Response Time : N.A Think Time : N.A Minimum Instruction Time : 0

Correct Marks : 1 Wrong Marks : 0

According to the passage, which of the following statements is true?

Options :

1. ✘ The Constitution gives more powers to the States.
2. ✘ The Constitution gives more powers to the Centre.
3. ✘ Neither the States nor the Centre has any powers.
4. ✔ Both the Centre and the States have equal powers.

Question Number : 83 Question Id : 872834990 Question Type : MCQ Option Shuffling : Yes Display Question Number : Yes Is Question Mandatory : No Calculator : None Response Time : N.A Think Time : N.A Minimum Instruction Time : 0

Correct Marks : 1 Wrong Marks : 0

According to the passage, which of the following statements is NOT true?

Options :

1. ✘ The division of powers is an inbuilt feature of the Constitution.
2. ✘ Our Constitution gives the Centre more powers than any other Federal Constitution.
3. ✔ The division of powers can be altered by the Centre and the Courts.

4. ✘ The Centre and the States are autonomous in their respective spheres.

Question Number : 84 Question Id : 872834991 Question Type : MCQ Option Shuffling : Yes Display Question Number : Yes Is Question Mandatory : No Calculator : None Response Time : N.A Think Time : N.A Minimum Instruction Time : 0

Correct Marks : 1 Wrong Marks : 0

According to the passage, the basic principle of Federalism is

Options :

1. ✘ Separation of powers between the Legislature, the Executive, and the Judiciary.
2. ✔ Division of legislative and executive powers between the Centre and the States.
3. ✘ Cordial relations between the Centre and the States.
4. ✘ Mutual dependence of the Centre and the States.

Question Number : 85 Question Id : 872834992 Question Type : MCQ Option Shuffling : Yes Display Question Number : Yes Is Question Mandatory : No Calculator : None Response Time : N.A Think Time : N.A Minimum Instruction Time : 0

Correct Marks : 1 Wrong Marks : 0

The word 'residuary' in the passage means

Options :

1. ✘ Excessive
2. ✘ Equal
3. ✘ Permanent
4. ✔ Remaining

Sub-Section Number :

2

Sub-Section Id :

87283440

Question Shuffling Allowed :

Yes

Question Number : 86 Question Id : 872834993 Question Type : MCQ Option Shuffling : Yes Display Question Number : Yes Is Question Mandatory : No Calculator : None Response Time : N.A Think Time : N.A Minimum Instruction Time : 0

Correct Marks : 1 Wrong Marks : 0

Identify the word with the correct spelling.

Options :

1. ✘ Achieve
2. ✘ Concieve

3. ✓ Perceive

4. ✗ Hygeine

Question Number : 87 Question Id : 872834994 Question Type : MCQ Option Shuffling : Yes Display Question Number : Yes Is Question Mandatory : No Calculator : None Response Time : N.A Think Time : N.A Minimum Instruction Time : 0

Correct Marks : 1 Wrong Marks : 0

Identify the word with the incorrect spelling.

Options :

1. ✗ Courageous

2. ✓ Necessary

3. ✗ Characteristic

4. ✗ Adolescence

Question Number : 88 Question Id : 872834995 Question Type : MCQ Option Shuffling : Yes Display Question Number : Yes Is Question Mandatory : No Calculator : None Response Time : N.A Think Time : N.A Minimum Instruction Time : 0

Correct Marks : 1 Wrong Marks : 0

The homemade cake was _____.

Fill in the blank with the appropriate word.

Options :

1. ✓ Delectable

2. ✗ Combative

3. ✗ Avuncular

4. ✗ Iridescent

Question Number : 89 Question Id : 872834996 Question Type : MCQ Option Shuffling : Yes Display Question Number : Yes Is Question Mandatory : No Calculator : None Response Time : N.A Think Time : N.A Minimum Instruction Time : 0

Correct Marks : 1 Wrong Marks : 0

The woman was old and very weak.

Choose the appropriate synonym of the underlined word.

Options :

1. ✗ Complicit

2. ✘ Active

3. ✔ Frail

4. ✘ Robust

Question Number : 90 Question Id : 872834997 Question Type : MCQ Option Shuffling : Yes Display Question Number : Yes Is Question Mandatory : No Calculator : None Response Time : N.A Think Time : N.A Minimum Instruction Time : 0

Correct Marks : 1 Wrong Marks : 0

His silence shows his tacit support.

Choose the appropriate antonym of the underlined word.

Options :

1. ✘ Implicit

2. ✔ Explicit

3. ✘ Complaint

4. ✘ Appropriate

Question Number : 91 Question Id : 872834998 Question Type : MCQ Option Shuffling : Yes Display Question Number : Yes Is Question Mandatory : No Calculator : None Response Time : N.A Think Time : N.A Minimum Instruction Time : 0

Correct Marks : 1 Wrong Marks : 0

To show someone the ropes is to

Options :

1. ✘ Teach someone how to escape

2. ✘ Put pressure on someone

3. ✘ Influence someone

4. ✔ Show someone how to do a work

Question Number : 92 Question Id : 872834999 Question Type : MCQ Option Shuffling : Yes Display Question Number : Yes Is Question Mandatory : No Calculator : None Response Time : N.A Think Time : N.A Minimum Instruction Time : 0

Correct Marks : 1 Wrong Marks : 0

A group of eagles is called a

Options :

1. ✖ Constellation
2. ✔ Convocation
3. ✖ Parliament
4. ✖ Colony

Question Number : 93 Question Id : 8728341000 Question Type : MCQ Option Shuffling : Yes Display Question Number : Yes Is Question Mandatory : No Calculator : None Response Time : N.A Think Time : N.A Minimum Instruction Time : 0

Correct Marks : 1 Wrong Marks : 0

Instead of some good music, it was a pretty bad film.
Replace the underlined phrase with an appropriate one.

Options :

1. ✖ In addition to
2. ✖ On the whole
3. ✔ In spite of
4. ✖ According to

Question Number : 94 Question Id : 8728341001 Question Type : MCQ Option Shuffling : Yes Display Question Number : Yes Is Question Mandatory : No Calculator : None Response Time : N.A Think Time : N.A Minimum Instruction Time : 0

Correct Marks : 1 Wrong Marks : 0

Irresponsible statements always _____ strong reactions.
Fill in the blank with the appropriate phrasal verb.

Options :

1. ✖ Bring down
2. ✔ Bring forth
3. ✖ Bring off
4. ✖ Bring forward

Question Number : 95 Question Id : 8728341002 Question Type : MCQ Option Shuffling : Yes Display Question Number : Yes Is Question Mandatory : No Calculator : None Response Time : N.A Think Time : N.A Minimum Instruction Time : 0

Correct Marks : 1 Wrong Marks : 0

Hundred rupees are not a lot of money these days.
Identify the part of the sentence with an error.

Options :

1. ✘ Hundred rupees
2. ✔ are
3. ✘ a lot of
4. ✘ these days

Question Number : 96 Question Id : 8728341003 Question Type : MCQ Option Shuffling : Yes Display Question Number : Yes Is Question Mandatory : No Calculator : None Response Time : N.A Think Time : N.A Minimum Instruction Time : 0

Correct Marks : 1 Wrong Marks : 0

The film, including the story and the songs, were boring.
Identify the part of the sentence with an error.

Options :

1. ✘ The film
2. ✘ the story
3. ✘ the songs
4. ✔ were boring

Question Number : 97 Question Id : 8728341004 Question Type : MCQ Option Shuffling : Yes Display Question Number : Yes Is Question Mandatory : No Calculator : None Response Time : N.A Think Time : N.A Minimum Instruction Time : 0

Correct Marks : 1 Wrong Marks : 0

Identify the correct sentence.

Options :

1. ✘ The English news are at nine in the morning.
2. ✘ Mathematics are my favourite subject.
3. ✔ My pair of jeans needs no ironing.
4. ✘ Each of us have work experience.

Question Number : 98 Question Id : 8728341005 Question Type : MCQ Option Shuffling : Yes Display Question Number : Yes Is Question Mandatory : No Calculator : None Response Time : N.A Think Time : N.A Minimum Instruction Time : 0

Correct Marks : 1 Wrong Marks : 0

Identify the incorrect sentence.

Options :

1. ✘ He neither sings nor dances.
2. ✘ He either comes or calls.
3. ✘ He will have either tea or coffee.
4. ✔ He will neither comes late nor leaves early.

Question Number : 99 Question Id : 8728341006 Question Type : MCQ Option Shuffling : Yes Display Question Number : Yes Is Question Mandatory : No Calculator : None Response Time : N.A Think Time : N.A Minimum Instruction Time : 0

Correct Marks : 1 Wrong Marks : 0

Fill in the blank with the appropriate connective.

He had the map. _____ he lost his way.

Options :

1. ✘ Although
2. ✘ Whereas
3. ✘ So
4. ✔ Yet

Question Number : 100 Question Id : 8728341007 Question Type : MCQ Option Shuffling : Yes Display Question Number : Yes Is Question Mandatory : No Calculator : None Response Time : N.A Think Time : N.A Minimum Instruction Time : 0

Correct Marks : 1 Wrong Marks : 0

The word 'bookie' is associated with

Options :

1. ✘ Publishing
2. ✘ Libraries
3. ✔ Betting
4. ✘ Binding

General Knowledge and Educational Issues

Section Id :	87283434
Section Number :	4
Section type :	Online
Mandatory or Optional :	Mandatory
Number of Questions :	30
Number of Questions to be attempted :	30
Section Marks :	30
Enable Mark as Answered Mark for Review and Clear Response :	Yes
Maximum Instruction Time :	0
Sub-Section Number :	1
Sub-Section Id :	87283441
Question Shuffling Allowed :	Yes

Question Number : 101 Question Id : 8728341008 Question Type : MCQ Option Shuffling : Yes Display Question Number : Yes Is Question Mandatory : No Calculator : None Response Time : N.A Think Time : N.A Minimum Instruction Time : 0

Correct Marks : 1 Wrong Marks : 0

What is the theme of 'World Environment Day' for the year 2022?

سال 2022 کے 'عالمی یوم ماحولیات' کا موضوع کیا ہے؟

Options :

Ecosystem Restoration

1. ✘ ایکوسسٹم کی بازیابی

Only One Earth

2. ✔ صرف ایک زمین

Global Pollution

3. ✘ عالمی آلودگی

Time for Nature

4. ✘ قدرت کے لئے وقت

Question Number : 102 Question Id : 8728341009 Question Type : MCQ Option Shuffling : Yes Display Question Number : Yes Is Question Mandatory : No Calculator : None Response Time : N.A Think Time : N.A Minimum Instruction Time : 0

Correct Marks : 1 Wrong Marks : 0

Who is the Present Cabinet Minister of the Ministry of Education in India?

ہندوستان میں موجودہ وزارت تعلیم کے کابینہ وزیر کون ہیں؟

Options :

Shri Ramesh Pokhriyal

1. ✘ شری رمیش پوکھریال

Shrimati Nirmala Sitharaman

2. ✘ شری متی نرملاسیتارمن

Shri Dharmendra Pradhan

3. ✓ شری دھرمندر پرادھان

Shri Rajnath Sing

4. ✘ شری راج ناتھ سنگھ

Question Number : 103 Question Id : 8728341010 Question Type : MCQ Option Shuffling : Yes Display Question Number : Yes Is Question Mandatory : No Calculator : None Response Time : N.A Think Time : N.A Minimum Instruction Time : 0

Correct Marks : 1 Wrong Marks : 0

Name the person who is a 125-year old yoga practitioner serving leprosy-affected people for about 50 years and won Padma Shri in 2022

اس شخص کا نام بتائیے جو 125 سال کی عمر کے یوگا کرنے والے ہیں اور 50 سالوں سے کوڑھ سے متاثرہ لوگوں کی خدمت کر رہے

ہیں اور انھیں 2022 کا پدم شری ایوارڈ دیا گیا

Options :

Tulshi Gowda

1. ✘ تلشی گوڈا

Avani Lekhara

2. ✘ اوانی لکھارا

Swami Sivananda

3. ✓ سوامی سیوانندا

Devendra Jhajharia

4. ✘ دیویندر جھاجھاریا

Question Number : 104 Question Id : 8728341011 Question Type : MCQ Option Shuffling : Yes Display Question Number : Yes Is Question Mandatory : No Calculator : None Response Time : N.A Think Time : N.A Minimum Instruction Time : 0

Correct Marks : 1 Wrong Marks : 0

Which is the host city of Commonwealth Games 2022?

کامن ویلتھ گیمس 2022 کو کس شہر میں منعقد کیا جا رہا ہے؟

Options :

Rio de Janeiro

1. ✘ ریو ڈی جینیوریو

Birmingham

2. ✔ برمنگھم

Mumbai

3. ✘ ممبئی

Melbourne

4. ✘ ملبورن

Question Number : 105 Question Id : 8728341012 Question Type : MCQ Option Shuffling : Yes Display Question Number : Yes Is Question Mandatory : No Calculator : None Response Time : N.A Think Time : N.A Minimum Instruction Time : 0

Correct Marks : 1 Wrong Marks : 0

What is the name of the initiative of the Government of India to celebrate and commemorate 75 years of independence ?

حکومت ہند کے اس پروگرام کا نام بتائیے جو آزادی کے 75 سال کو منانے کے لئے شروع کیا گیا؟

Options :

Unnat Bharat Abhiyan

1. ✘ انت بھارت ابھیان

POSHAN

2. ✘ پوشان

Pragyata

3. ✘ پرگیتا

Azadi Ka Amrit Mahotsav

4. ✓ آزادی کا امرت مہا تسو

Question Number : 106 Question Id : 8728341013 Question Type : MCQ Option Shuffling : Yes Display Question Number : Yes Is Question Mandatory : No Calculator : None Response Time : N.A Think Time : N.A Minimum Instruction Time : 0

Correct Marks : 1 Wrong Marks : 0

Which state in India has the highest number of Geographical indication tags in India ?

ہندوستان کی کس ریاست میں سب سے زیادہ تعداد میں جغرافیائی اشارے ٹیا گھس ہیں؟

Options :

Tamil Nadu

1. ✘ تاماناڈو

Karnataka

2. ✓ کرناٹک

Telangana

3. ✘ تلنگانہ

West Bengal

4. ✘ مغربی بنگال

Question Number : 107 Question Id : 8728341014 Question Type : MCQ Option Shuffling : Yes Display Question Number : Yes Is Question Mandatory : No Calculator : None Response Time : N.A Think Time : N.A Minimum Instruction Time : 0

Correct Marks : 1 Wrong Marks : 0

How many countries are there in the world?

دنیا بھر میں کتنے ممالک ہیں؟

Options :

1. ✓ 195

2. ✘ 183

3. ✘ 200

4. ✖ 197

Question Number : 108 Question Id : 8728341015 Question Type : MCQ Option Shuffling : Yes Display Question Number : Yes Is Question Mandatory : No Calculator : None Response Time : N.A Think Time : N.A Minimum Instruction Time : 0

Correct Marks : 1 Wrong Marks : 0

What was India's rank in the Global Hunger Index 2021, out of 116 countries?

گلوبل ہنگر انڈیکس 2021 میں 116 ممالک میں سے ہندوستان کا کیا رینک ہے؟

Options :

1. ✖ 94

2. ✖ 88

3. ✖ 64

4. ✔ 101

Question Number : 109 Question Id : 8728341016 Question Type : MCQ Option Shuffling : Yes Display Question Number : Yes Is Question Mandatory : No Calculator : None Response Time : N.A Think Time : N.A Minimum Instruction Time : 0

Correct Marks : 1 Wrong Marks : 0

What was the theme of India Pavilion at COP-25 at Madrid, Spain in the year 2019?

سال 2019 میں میڈرڈ، اسپین کے انڈیا پولین کے COP-25 کا موضوع کیا تھا؟

Options :

150 years of the Mahatma

1. ✔ مہاتما کے 150 سال

Enabling the Revolution

2. ✖ انقلاب کے قابل بنانا

Rural India

3. ✖ دیہی انڈیا

India and a Better New World

4. ✖ ہندوستان اور ایک بہتر نئی دنیا

Question Number : 110 Question Id : 8728341017 Question Type : MCQ Option Shuffling : Yes Display Question Number : Yes Is Question Mandatory : No Calculator : None Response Time : N.A Think Time : N.A Minimum Instruction Time : 0

Correct Marks : 1 Wrong Marks : 0

Which community radio station inaugurated by PM Modi in April, 2022 was dedicated to animal husbandry?

اپریل 2022 میں کس کمیونٹی ریڈیو اسٹیشن کا وزیراعظم نریندر مودی نے افتتاح کیا جو اینیمل ہسبنڈری کے لئے منسوب کیا گیا

Options :

Gomata Vani

1. ✘ گوماتا وانی

Gaushala Vani

2. ✘ گئوشالہ وانی

Banas Adi Katha

3. ✘ بناس ادی کتھا

Dudh Vani

4. ✔ دودھ وانی

Question Number : 111 Question Id : 8728341018 Question Type : MCQ Option Shuffling : Yes Display Question Number : Yes Is Question Mandatory : No Calculator : None Response Time : N.A Think Time : N.A Minimum Instruction Time : 0

Correct Marks : 1 Wrong Marks : 0

How many places in India have been inscribed in the World Heritage Sites list?

ہندوستان میں کتنے مقامات ورلڈ ہیئرٹینج سائٹ کی فہرست میں شامل ہیں؟

Options :

1. ✘ 38

2. ✘ 50

3. ✔ 40

4. ✘ 51

Question Number : 112 Question Id : 8728341019 Question Type : MCQ Option Shuffling : Yes Display Question Number : Yes Is Question Mandatory : No Calculator : None Response Time : N.A Think Time : N.A Minimum Instruction Time : 0

Correct Marks : 1 Wrong Marks : 0

From the point of view of population control through family planning there should be

فیملی پلاننگ کے ذریعے آبادی پر قابو پانے کے نقطہ نظر سے یہ ہونا چاہئے

Options :

More literacy of males than females

1. ✘ خواتین کی بہ نسبت مردوں کی زیادہ خواندگی

More literacy of women than men

2. ✔ مردوں کی بہ نسبت خواتین کی زیادہ خواندگی

Eradication of illiteracy of the old men

3. ✘ بوڑھے افراد سے ناخواندگی دور کرنا

Emphasis on expansion of education

4. ✘ تعلیم کے پھیلاؤ پر زور

Question Number : 113 Question Id : 8728341020 Question Type : MCQ Option Shuffling : Yes Display Question Number : Yes Is Question Mandatory : No Calculator : None Response Time : N.A Think Time : N.A Minimum Instruction Time : 0

Correct Marks : 1 Wrong Marks : 0

Chipko movement was first led by

چیکو تحریک کی سب سے پہلے قیادت کی

Options :

Sunderlal Bahuguna

1. ✔ سندرلال بہوگنا

Rajiv Gandhi

2. ✘ راجیو گاندھی

Ramdev Mishra

3. ✘ رام دیو مشرا

Indira Gandhi

4. ✘ اندرا گاندھی

Question Number : 114 Question Id : 8728341021 Question Type : MCQ Option Shuffling : Yes Display Question Number : Yes Is Question Mandatory : No Calculator : None Response Time : N.A Think Time : N.A Minimum Instruction Time : 0

Correct Marks : 1 Wrong Marks : 0

Maximum air pollution is caused by

زیادہ تر آلودگی اس سبب سے ہوتی ہے؟

Options :

Smoke

1. ✘ دھواں

Insecticides

2. ✘ کیڑا مار دوائیں

Industries

3. ✘ صنعتیں

automobile exhaust

4. ✔ گاڑیوں سے نکلنے والا دھواں

Question Number : 115 Question Id : 8728341022 Question Type : MCQ Option Shuffling : Yes Display Question Number : Yes Is Question Mandatory : No Calculator : None Response Time : N.A Think Time : N.A Minimum Instruction Time : 0

Correct Marks : 1 Wrong Marks : 0

It is believed that the thinning of the ozone layer is the result of chlorofluorocarbons.

These gases have been used in:

یہ مانا جاتا ہے کہ اوزون پر ت کا پتلا ہونا کلور و فلور و کاربن کا نتیجہ ہیں۔ یہ گیس اس میں استعمال ہوتے ہیں۔

Options :

Electric heaters and clothes driers

1. ✘ الیکٹرک ہیٹرز اور کپڑوں کے ڈرائرز

Spray cans and refrigerators

2. ✔ اسپرے کیپس اور ریفریجریٹرز

Cigarette lighters and air-conditioners

3. ✘ سگریٹ لائٹرز اور ایئر کنڈیشنرز

Washing machines and wet grinders

4. ✘ واشنگ مشین اور ویٹ گرینڈرز

Question Number : 116 Question Id : 8728341023 Question Type : MCQ Option Shuffling : Yes Display Question Number : Yes Is Question Mandatory : No Calculator : None Response Time : N.A Think Time : N.A Minimum Instruction Time : 0

Correct Marks : 1 Wrong Marks : 0

The winner of the 2021 UNESCO's King Hamad Bin Isa Al-Khalifa Prize for the use of Information and Communication Technologies (ICTs) in Education is ...

یونیسکو کے شاہ حمد بن عیسیٰ الخلیفہ انعام 2021 برائے تعلیم میں ترسیلی و اطلاعی تکنالوجی کے استعمال کے جیتنے والے

Options :

1. ✘ IIT, Delhi
آئی آئی ٹی، دہلی
2. ✘ NIT, Warangal
این آئی ٹی ورنگل
3. ✘ NIEPA, Delhi
این آئی ای ٹی، دہلی
4. ✔ CIET, Delhi
سی آئی ای ٹی، دہلی

Question Number : 117 Question Id : 8728341024 Question Type : MCQ Option Shuffling : Yes Display Question Number : Yes Is Question Mandatory : No Calculator : None Response Time : N.A Think Time : N.A Minimum Instruction Time : 0

Correct Marks : 1 Wrong Marks : 0

The Five Foundation Pillars of NEP 2020 are ...

NEP 2020 کے پانچ بنیادی ستون ہیں

Options :

1. ✘ Affordability, Accessibility, Accountability, Equality and Quality
قابل گنجائش، قابل رسائی، شراکت، مساوات اور معیار
2. ✘ Affordability, Accessibility, Equity, Equality and Quality
قابل گنجائش، قابل رسائی، قابل احتساب، شراکت اور معیار
3. ✔ Affordability, Accessibility, Accountability, Equity and Quality
قابل گنجائش، قابل رسائی، قابل احتساب، شراکت اور معیار
4. ✘ Affordability, Accessibility, Accountability, Quantity and Quality
قابل گنجائش، قابل رسائی، قابل احتساب، کمیت اور معیار

Question Number : 118 Question Id : 8728341025 Question Type : MCQ Option Shuffling : Yes Display Question Number : Yes Is Question Mandatory : No Calculator : None Response Time : N.A Think Time : N.A Minimum Instruction Time : 0

Correct Marks : 1 Wrong Marks : 0

NEP 2020 focuses on promoting “Experiential learning” in all stages. It will be adopted except for one of the following.

NEP 2020 تمام سطحوں پر، تجرباتی اکتساب کے فروغ پر توجہ مرکوز کرتا ہے۔ اس پر عمل کیا جاسکتا ہے سوائے اس ایک کے

Options :

hands-on learning

1. ✘ ہینڈز آن لرننگ

story-telling-based pedagogy

2. ✘ کہانی سنانے پر مبنی طریقہ کار

scriptures – based pedagogy

3. ✔ کتبات پر مبنی طریقہ کار

sports and arts-integrated education

4. ✘ اسپورٹس اور آرٹس کا مربوط نظام تعلیم

Question Number : 119 Question Id : 8728341026 Question Type : MCQ Option Shuffling : Yes Display Question Number : Yes Is Question Mandatory : No Calculator : None Response Time : N.A Think Time : N.A Minimum Instruction Time : 0

Correct Marks : 1 Wrong Marks : 0

How many channels are there in Swayam Prabha?

سوویم پر بھائیں کتنے چینلس ہیں؟

Options :

1. ✘ 23

2. ✘ 30

3. ✔ 34

4. ✘ 42

Question Number : 120 Question Id : 8728341027 Question Type : MCQ Option Shuffling : Yes Display Question Number : Yes Is Question Mandatory : No Calculator : None Response Time : N.A Think Time : N.A Minimum Instruction Time : 0

Correct Marks : 1 Wrong Marks : 0

Which of the following is the scheme which the Ministry of Education has launched a mega online challenge to test the ability of students to innovate?

درج ذیل کون سی اسکیم کو وزارت تعلیم نے طلباء کی تخلیقی صلاحیتوں کی جانچ کے لئے آن لائن میگا چیلنج کے بطور آغاز کیا

Options :

1. ✘ SPARSH
2. ✘ SAMMAN
3. ✘ SANYUKT
4. ✔ SAMADHAN

Question Number : 121 Question Id : 8728341028 Question Type : MCQ Option Shuffling : Yes Display Question Number : Yes Is Question Mandatory : No Calculator : None Response Time : N.A Think Time : N.A Minimum Instruction Time : 0

Correct Marks : 1 Wrong Marks : 0

What is the full form of MOOC ?

MOOC کی مکمل شکل کیا ہے؟

Options :

1. ✘ Massive Open Objective Course
2. ✘ Massive Online Open Course
3. ✔ Massive Open Online Course
4. ✘ Massive Open Online Content

Question Number : 122 Question Id : 8728341029 Question Type : MCQ Option Shuffling : Yes Display Question Number : Yes Is Question Mandatory : No Calculator : None Response Time : N.A Think Time : N.A Minimum Instruction Time : 0

Correct Marks : 1 Wrong Marks : 0

SWAYAM is initiated by Government of India with the objectives to ...

حکومت ہند کی جانب سے SWAYAM کو اس مقصد کے لئے شروع کیا گیا

- i) Provide quality materials with nominal cost
معیاری اشیاء کو برائے نام قیمت پر مہیا کرنا
- ii) Ensure best quality content is produced and delivered
اس بات کو یقینی بنانا کہ معیاری مواد تیار کیا جاتا اور ڈیلیور کیا جاتا ہے
- iii) Assess students continuously and grant degrees
طلباء کی مسلسل جانچ کی جائے اور ڈگریاں دی جائیں
- iv) Accessed by anyone, anywhere at anytime
کوئی بھی اور کہیں بھی رسائی کر سکتا ہے

Options :

1. ✘ ii, iii and iv
2. ✘ i, ii and iii
3. ✘ i, iii and iv
4. ✔ i, ii and iv

Question Number : 123 Question Id : 8728341030 Question Type : MCQ Option Shuffling : Yes Display Question Number : Yes Is Question Mandatory : No Calculator : None Response Time : N.A Think Time : N.A Minimum Instruction Time : 0

Correct Marks : 1 Wrong Marks : 0

Till which year Rashtriya Uchchar Shiksha Abhiyan (RUSA) has been approved for the continuation?

کس سال تک راشٹریہ اچھ چھاترا بھیاں (RUSA) کو جاری رکھنے کی منظوری دی گئی

Options :

1. ✘ 2024
2. ✔ 2026
3. ✘ 2028
4. ✘ 2030

Question Number : 124 Question Id : 8728341031 Question Type : MCQ Option Shuffling : Yes Display Question Number : Yes Is Question Mandatory : No Calculator : None Response Time : N.A Think Time : N.A Minimum Instruction Time : 0

Correct Marks : 1 Wrong Marks : 0

Which of these is not a qualifier for the EWS quota?

درج ذیل میں کون EWS کو مانا کے لئے اہل نہیں ہیں؟

Options :

Less than 5 acres of land

1. ✘ پانچ ایکڑ سے کم زمین

Annual income less than rupees 8 lakh a year

2. ✘ سالانہ آمدنی 8 لاکھ سے کم

Residential home smaller than 1,000 sq. ft

3. ✘ رہائشی مکان 1,000 مربع فیٹ سے کم

OBC, SC, ST Caste certificate

4. ✔ OBC, SC, ST کی ذات کا سرٹیفکیٹ

Question Number : 125 Question Id : 8728341032 Question Type : MCQ Option Shuffling : Yes Display Question Number : Yes Is Question Mandatory : No Calculator : None Response Time : N.A Think Time : N.A Minimum Instruction Time : 0

Correct Marks : 1 Wrong Marks : 0

A student pursuing a Masters Course in Science (M.Sc.) has chosen a course in Buddhism from Philosophy Department under CBCS. Which course does Buddhism represent?

کوئی طالب علم جو ماسٹرز کورس ان سائنس (M.Sc.) کر رہا ہے، وہ فلاسفی ڈپارٹمنٹ کے کورس بدھ ازم کو منتخب کرتا ہے CBCS کے تحت بدھ ازم کورس کس کو ظاہر کرے گا؟

Options :

Core

1. ✘ اہم مضمون

Ability Enhancement

2. ✘ صلاحیتوں کا فروغ

Elective

3. ✔ انتخابی

Foundation

4. ✘ بنیادی

Question Number : 126 Question Id : 8728341033 Question Type : MCQ Option Shuffling : Yes Display Question Number : Yes Is Question Mandatory : No Calculator : None Response Time : N.A Think Time : N.A Minimum Instruction Time : 0

Correct Marks : 1 Wrong Marks : 0

Who is a child as per POCSO act?

POCSO ایکٹ کے تحت کون بچہ ہے

Options :

1. ✓ Anyone below 18 years of age
جو بھی اٹھارہ سال کی عمر سے کم ہو
2. ✘ Anyone below 16 years of age
جو بھی سولہ سال کی عمر سے کم ہو
3. ✘ Anyone below 14 years of age
جو بھی چودہ سال کی عمر سے کم ہو
4. ✘ Anyone below 10 years of age
جو بھی دس سال کی عمر سے کم ہو

Question Number : 127 Question Id : 8728341034 Question Type : MCQ Option Shuffling : Yes Display Question Number : Yes Is Question Mandatory : No Calculator : None Response Time : N.A Think Time : N.A Minimum Instruction Time : 0

Correct Marks : 1 Wrong Marks : 0

Under which Ministry the Scholarship for PMCARES Children' scheme was launched?

کس وزارت کے تحت PMCARES اسکیم برائے اطفال شروع کی گئی؟

Options :

1. ✘ Ministry of Women and Children
وزارت برائے خواتین و اطفال
2. ✓ Ministry of Social Justice and Empowerment
وزارت برائے سماجی انصاف اور بااختیاری
3. ✘ Ministry of Law and Justice
وزارت برائے قانون اور انصاف
4. ✘ Ministry of Home Affairs
وزارت برائے امور داخلہ

Question Number : 128 Question Id : 8728341035 Question Type : MCQ Option Shuffling : Yes Display Question Number : Yes Is Question Mandatory : No Calculator : None Response Time : N.A Think Time : N.A Minimum Instruction Time : 0

Correct Marks : 1 Wrong Marks : 0

Sri Kaloji Narayana Rao University of Health Sciences is located in the district of

سری کالوجی نارائن راؤ یونیورسٹی آف ہیلتھ سائنس کس ضلع میں واقع ہے؟

Options :

Hyderabad

1. ✘ حیدرآباد

Warangal

2. ✔ ورنگل

Mahbubnagar

3. ✘ محبوب نگر

Nizamabad

4. ✘ نظام آباد

Question Number : 129 Question Id : 8728341036 Question Type : MCQ Option Shuffling : Yes Display Question Number : Yes Is Question Mandatory : No Calculator : None Response Time : N.A Think Time : N.A Minimum Instruction Time : 0

Correct Marks : 1 Wrong Marks : 0

Which of the following scheme provides Education to Girls and their welfare

درج ذیل کون سی اسکیم لڑکیوں کی تعلیم اور ان کی بھلائی کو مہیا کرتی ہے؟

Options :

UJJWALA

1. ✘ اجولا

One Stop Centre Scheme

2. ✘ ایک اسٹاپ مرکزی اسکیم

SWADHAR Scheme

3. ✘ سوادھارا اسکیم

Beti Bachao Beti Padhao

4. ✔ بیٹی بچاؤ بیٹی پڑھاؤ

Question Number : 130 Question Id : 8728341037 Question Type : MCQ Option Shuffling : Yes Display Question Number : Yes Is Question Mandatory : No Calculator : None Response Time : N.A Think Time : N.A Minimum Instruction Time : 0

Correct Marks : 1 Wrong Marks : 0

Full form of PARAKH:

PARAKH کی مکمل شکل

Options :

1. ✘ Performance Assessment, Review, and Analysis of Knowledge for Holistic Deployment
2. ✘ Performance Assessment, Review, and Analysis of Knowledge for Highest Development
3. ✔ Performance Assessment, Review, and Analysis of Knowledge for Holistic Development
4. ✘ Performance Assessment, Relation, and Analysis of Knowledge for Holistic Development

Computer Awareness

Section Id :	87283435
Section Number :	5
Section type :	Online
Mandatory or Optional :	Mandatory
Number of Questions :	20
Number of Questions to be attempted :	20
Section Marks :	20
Enable Mark as Answered Mark for Review and Clear Response :	Yes
Maximum Instruction Time :	0
Sub-Section Number :	1
Sub-Section Id :	87283442
Question Shuffling Allowed :	Yes

Question Number : 131 Question Id : 8728341038 Question Type : MCQ Option Shuffling : Yes Display Question Number : Yes Is Question Mandatory : No Calculator : None Response Time : N.A Think Time : N.A Minimum Instruction Time : 0

Correct Marks : 1 Wrong Marks : 0

The following are the components of Central Processing Unit (CPU)

درج ذیل سنٹرل پراسسنگ یونٹ (CPU) کے اجزاء ہیں

Options :

Arithmetic logic unit, Mouse

1. ✘ حسابی لاجک یونٹ، ماؤز

Arithmetic logic unit, Control unit

2. ✔ حسابی لاجک یونٹ، کنٹرول یونٹ

Arithmetic logic unit, Integrated Circuits

3. ✘ حسابی لاجک یونٹ، انٹیگریٹڈ سرکٹ

Control Unit, Monitor

4. ✘ کنٹرول یونٹ، مونیٹر

Question Number : 132 Question Id : 8728341039 Question Type : MCQ Option Shuffling : Yes Display Question Number : Yes Is Question Mandatory : No Calculator : None Response Time : N.A Think Time : N.A Minimum Instruction Time : 0

Correct Marks : 1 Wrong Marks : 0

What kind of data is processed by an analog computer?

انالوگ کمپیوٹر کے ذریعے کس قسم کا ڈیٹا پراسس کیا جاتا ہے؟

Options :

Discrete Data

1. ✘ ڈسکرٹ ڈیٹا

Intermittent Data

2. ✘ انٹرمیٹنٹ ڈیٹا

Discretely varying Data

3. ✘ ڈسکرٹلی ویرائننگ ڈیٹا

Continuously varying Data

4. ✔ مسلسل ویرائننگ ڈیٹا

Question Number : 133 Question Id : 8728341040 Question Type : MCQ Option Shuffling : Yes Display Question Number : Yes Is Question Mandatory : No Calculator : None Response Time : N.A Think Time : N.A Minimum Instruction Time : 0

Correct Marks : 1 Wrong Marks : 0

Which level language is Assembly Language?

اسمبلی لنگویج کس درجہ کی لنگویج ہے؟

Options :

high-level programming language

1. ✘ ہائی لیول پروگرامنگ لنگویج

medium-level programming language

2. ✘ میڈیم لیول پروگرامنگ لنگویج

low-level programming language

3. ✔ لو-لیول پروگرامنگ لنگویج

machine language

4. ✘ مشین لنگویج

Question Number : 134 Question Id : 8728341041 Question Type : MCQ Option Shuffling : Yes Display Question Number : Yes Is Question Mandatory : No Calculator : None Response Time : N.A Think Time : N.A Minimum Instruction Time : 0

Correct Marks : 1 Wrong Marks : 0

What is full form of GUI related to computers?

کمپیوٹرز کے حوالے سے GUI کی مکمل شکل کیا ہے؟

Options :

1. ✘ Graphical user Instrument

2. ✘ Graphical unified Interface

3. ✘ Graphical unified Instrument

4. ✔ Graphical user Interface

Question Number : 135 Question Id : 8728341042 Question Type : MCQ Option Shuffling : Yes Display Question Number : Yes Is Question Mandatory : No Calculator : None Response Time : N.A Think Time : N.A Minimum Instruction Time : 0

Correct Marks : 1 Wrong Marks : 0

Verification is process of

ویریفیکیشن یہ عمل ہے

Options :

Access

1. ✘ آکس

Login

2. ✘ لاگ ان

Logout

3. ✘ لاگ آؤٹ

Authentication

4. ✔ آتھن ٹی کیشن

Question Number : 136 Question Id : 8728341043 Question Type : MCQ Option Shuffling : Yes Display Question Number : Yes Is Question Mandatory : No Calculator : None Response Time : N.A Think Time : N.A Minimum Instruction Time : 0

Correct Marks : 1 Wrong Marks : 0

USB is which type of storage device ?

USB کس قسم کا اسٹوریج ڈیوائس ہے؟

Options :

Primary

1. ✘ پرائمری

Secondary

2. ✔ سکنڈری

Tertiary

3. ✘ ٹیری

Auxiliary

4. ✘ آکزیلیری

Question Number : 137 Question Id : 8728341044 Question Type : MCQ Option Shuffling : Yes Display Question Number : Yes Is Question Mandatory : No Calculator : None Response Time : N.A Think Time : N.A Minimum Instruction Time : 0

Correct Marks : 1 Wrong Marks : 0

Arrange in decreasing units of memory sizes – TB, GB, PB, MB.

The correct order is-

میموری کے سائز TB, GB, PB, MB کو گرتی ہوئی اکائیوں میں ترتیب دیجئے۔ صحیح ترتیب ہوگی

Options :

1. ✘ GB> PB> TB>MB

2. ✘ PB>TB>MB>GB

3. ✔ PB>TB> GB> MB

4. ✖ TB> PB>GB>MB

Question Number : 138 Question Id : 8728341045 Question Type : MCQ Option Shuffling : Yes Display Question Number : Yes Is Question Mandatory : No Calculator : None Response Time : N.A Think Time : N.A Minimum Instruction Time : 0

Correct Marks : 1 Wrong Marks : 0

Which of the following list shows memory types from highest to lowest access speed?

درج ذیل کون سی فہرست اعلیٰ تر سے کم تر اکیس اسپید میں ظاہر کرتی ہے

Options :

Secondary storage, main memory, cache, registers

1. ✖ سکندری اسٹوریج، مین میموری، کاچے، رجسٹرز

Registers, cache, secondary storage, main memory

2. ✖ رجسٹرز، کاچے، سکندری اسٹوریج، مین میموری

Registers, cache, main memory, secondary storage

3. ✔ رجسٹرز، کاچے، مین میموری، سکندری اسٹوریج

Cache, registers, main memory, secondary storage

4. ✖ کاچے، رجسٹرز، مین میموری، سکندری اسٹوریج

Question Number : 139 Question Id : 8728341046 Question Type : MCQ Option Shuffling : Yes Display Question Number : Yes Is Question Mandatory : No Calculator : None Response Time : N.A Think Time : N.A Minimum Instruction Time : 0

Correct Marks : 1 Wrong Marks : 0

ONE Mega Byte is equal to

ایک میگا بائٹ مساوی ہوتا ہے

Options :

1024 Bytes

1. ✖ 1024 بائٹس

1024 Kilo Bytes

2. ✔ 1024 کیلو بائٹس

1024 Giga Bits

3. ✖ 1024 گیگا بائٹس

1024 Bits

4. ✖ 1024 بٹس

Question Number : 140 Question Id : 8728341047 Question Type : MCQ Option Shuffling : Yes Display Question Number : Yes Is Question Mandatory : No Calculator : None Response Time : N.A Think Time : N.A Minimum Instruction Time : 0

Correct Marks : 1 Wrong Marks : 0

Which device among following is used for sending digital data over a phone line ?

درج ذیل کونسا ڈیوائس فون لائن پر ڈیجیٹل ڈیٹا کو بھیجنے کے لئے استعمال ہوتا ہے؟

Options :

USB

1. ✖ یو ایس بی

Scanner

2. ✖ اسکنر

Printer

3. ✖ پرنٹر

Modem

4. ✔ موڈم

Question Number : 141 Question Id : 8728341048 Question Type : MCQ Option Shuffling : Yes Display Question Number : Yes Is Question Mandatory : No Calculator : None Response Time : N.A Think Time : N.A Minimum Instruction Time : 0

Correct Marks : 1 Wrong Marks : 0

Microsoft office is type of ?

مائیکروسافٹ آفس کس کی قسم ہے؟

Options :

System software

1. ✖ سسٹم سافٹ ویئر

Application software

2. ✔ ایپلی کیشن سافٹ ویئر

Utility Software

3. ✖ یٹیلیٹی سافٹ ویئر

Firmware

4. ✘ فرم ویئر

Question Number : 142 Question Id : 8728341049 Question Type : MCQ Option Shuffling : Yes Display Question Number : Yes Is Question Mandatory : No Calculator : None Response Time : N.A Think Time : N.A Minimum Instruction Time : 0

Correct Marks : 1 Wrong Marks : 0

Which type of switching is used in Internet ?

انٹرنیٹ میں کس قسم کی سوچنگ استعمال ہوتی ہے

Options :

Packet

1. ✔ پاکٹ

Telephone

2. ✘ ٹیلی فون

Cyclic

3. ✘ سائیکلک

Telex

4. ✘ ٹیلیکس

Question Number : 143 Question Id : 8728341050 Question Type : MCQ Option Shuffling : Yes Display Question Number : Yes Is Question Mandatory : No Calculator : None Response Time : N.A Think Time : N.A Minimum Instruction Time : 0

Correct Marks : 1 Wrong Marks : 0

Which is responsible for communication between Memory and ALU ?

میموری اور ALU کے درمیان کونسی ترسیل ذمہ دار ہے؟

Options :

Keyboard

1. ✘ کی بورڈ

RAM

2. ✘ آراءے ایم

Control Unit

3. ✔ کنٹرول یونٹ

USB

4. ✘ یو ایس بی

Question Number : 144 Question Id : 8728341051 Question Type : MCQ Option Shuffling : Yes Display Question Number : Yes Is Question Mandatory : No Calculator : None Response Time : N.A Think Time : N.A Minimum Instruction Time : 0

Correct Marks : 1 Wrong Marks : 0

The contents of _____ are lost when the computer turns off.

جب کمپیوٹر کو بند کر دیا جاتا ہے تو اسکے مشمولات غائب ہو جاتے ہیں

Options :

storage

1. ✘ اسٹوریج

input

2. ✘ ان پٹ

output

3. ✘ آؤٹ پٹ

volatile memory

4. ✔ وولائٹائل میموری

Question Number : 145 Question Id : 8728341052 Question Type : MCQ Option Shuffling : Yes Display Question Number : Yes Is Question Mandatory : No Calculator : None Response Time : N.A Think Time : N.A Minimum Instruction Time : 0

Correct Marks : 1 Wrong Marks : 0

Which of the following is an example of hardware?

درج ذیل میں پارڈویئر کی مثال ہے

Options :

Assembler

1. ✘ اسمبلر

Server

2. ✔ سرور

Compiler

3. ✘ کمپائلر

Interpreter

4. ✘ انٹریپرٹر

Question Number : 146 Question Id : 8728341053 Question Type : MCQ Option Shuffling : Yes Display Question Number : Yes Is Question Mandatory : No Calculator : None Response Time : N.A Think Time : N.A Minimum Instruction Time : 0

Correct Marks : 1 Wrong Marks : 0

A device that is connected to the motherboard is called

وہ ڈیوائز جو مدر بورڈ سے جوڑا جاتا ہے

Options :

an external device

1. ✘ آکسٹرنل ڈیوائز

an adjunct device

2. ✘ ایڈجکٹ ڈیوائز

peripheral device

3. ✔ پیری فیئرل ڈیوائز

a ribbon cable

4. ✘ ربن کیبل

Question Number : 147 Question Id : 8728341054 Question Type : MCQ Option Shuffling : Yes Display Question Number : Yes Is Question Mandatory : No Calculator : None Response Time : N.A Think Time : N.A Minimum Instruction Time : 0

Correct Marks : 1 Wrong Marks : 0

What do you call a computer on a network that requests files from another computer?

کس نیٹ ورک پر اس کمپیوٹر کو آپ کیا کہیں گے جو دوسرے کمپیوٹر سے فائلز کی درخواست کرتا ہے

Options :

a client

1. ✔ کلائنٹ

a host

2. ✘ ہوسٹ

a router

3. ✘ راوٹر

a web master

4. ✘ ویب ماسٹر

Question Number : 148 Question Id : 8728341055 Question Type : MCQ Option Shuffling : Yes Display Question Number : Yes Is Question Mandatory : No Calculator : None Response Time : N.A Think Time : N.A Minimum Instruction Time : 0

Correct Marks : 1 Wrong Marks : 0

Which of the following best describes the WAN

درج ذیل میں کون WAN کو بہترین طریقہ پر بیان کرتا ہے؟

Options :

Connects LANs that are separated by a large geographic area

1. ✔

LANs کو جوڑتا ہے جو کہ ایک بڑے جغرافیائی رقبہ سے علیحدہ ہوتے ہیں

Connects workstations, terminals, and other devices in a metropolitan area

2. ✘

ایک میٹروپولیٹن علاقہ میں ورک اسٹیشن، ٹرمنلس اور دیگر ڈیوائسز کو جوڑتا ہے

Connects LANs within a large building

3. ✘

ایک بڑی بلڈنگ کے اندر LANs کو جوڑتا ہے

Connects workstations, terminals, and other devices within a building

4. ✘

ایک بلڈنگ کے اندر، ورک اسٹیشن، ٹرمنلس اور دیگر ڈیوائسز کو جوڑتا ہے

Question Number : 149 Question Id : 8728341056 Question Type : MCQ Option Shuffling : Yes Display Question Number : Yes Is Question Mandatory : No Calculator : None Response Time : N.A Think Time : N.A Minimum Instruction Time : 0

Correct Marks : 1 Wrong Marks : 0

What's a web browser?

ویب براؤزر کیا ہے؟

Options :

A kind of spider

1. ✘

مکڑی کی ایک قسم

A computer that stores WWW files

2. ✘

ایک کمپیوٹر جو WWW فائلز کو محفوظ رکھتا ہے

A person who likes to look at websites

3. ✘

ایک ایسا شخص جسے ویب سائٹس کو دیکھنا پسند ہوتا ہے

A software program that allows you to access sites on the World Wide Web

ایک ایسا سافٹ ویئر پروگرام جو آپ کو ورلڈ ویب پر سائٹس تک رسائی حاصل کرنے کے قابل بناتا ہے

4. ✓

Question Number : 150 Question Id : 8728341057 Question Type : MCQ Option Shuffling : Yes Display Question Number : Yes Is Question Mandatory : No Calculator : None Response Time : N.A Think Time : N.A Minimum Instruction Time : 0

Correct Marks : 1 Wrong Marks : 0

The outcome of system analysis says that a suitable model is to be suggested when the changes requested by the customer need to be quickly incorporated into the system. Which model of development is most suitable:

سسٹم انالیزس کا نتیجہ یہ کہتا ہے کہ جب کسٹمر کی جانب سے تبدیلیوں کی درخواست ہوتی ہے تو ایک موزوں ماڈل سسٹم میں اسکو فی الفور اطلاق کرنے کی تجویز کرتا ہے

Options :

Waterfall model

1. ✘ واٹر فال ماڈل

Spiral model

2. ✘ اسپائرل ماڈل

Agile model

3. ✓ ایجائل ماڈل

Evolutionary enhancement model

4. ✘ ایوالیوشنری انہاسمنٹ ماڈل